

Gas Exchange in Humans

Question Paper 2

Level	IGCSE
Subject	Biology
Exam Board	CIE
Topic	Gas Exchange in Humans
Paper Type	(Extended) Theory Paper
Booklet	Question Paper 2

Time Allowed: 27 minutes

Score: /22

Percentage: /100

1 The ribcage and diaphragm are involved in the breathing mechanism to ventilate the lungs.

Fig. 3.1 is a flow chart that shows the changes that take place when breathing in.

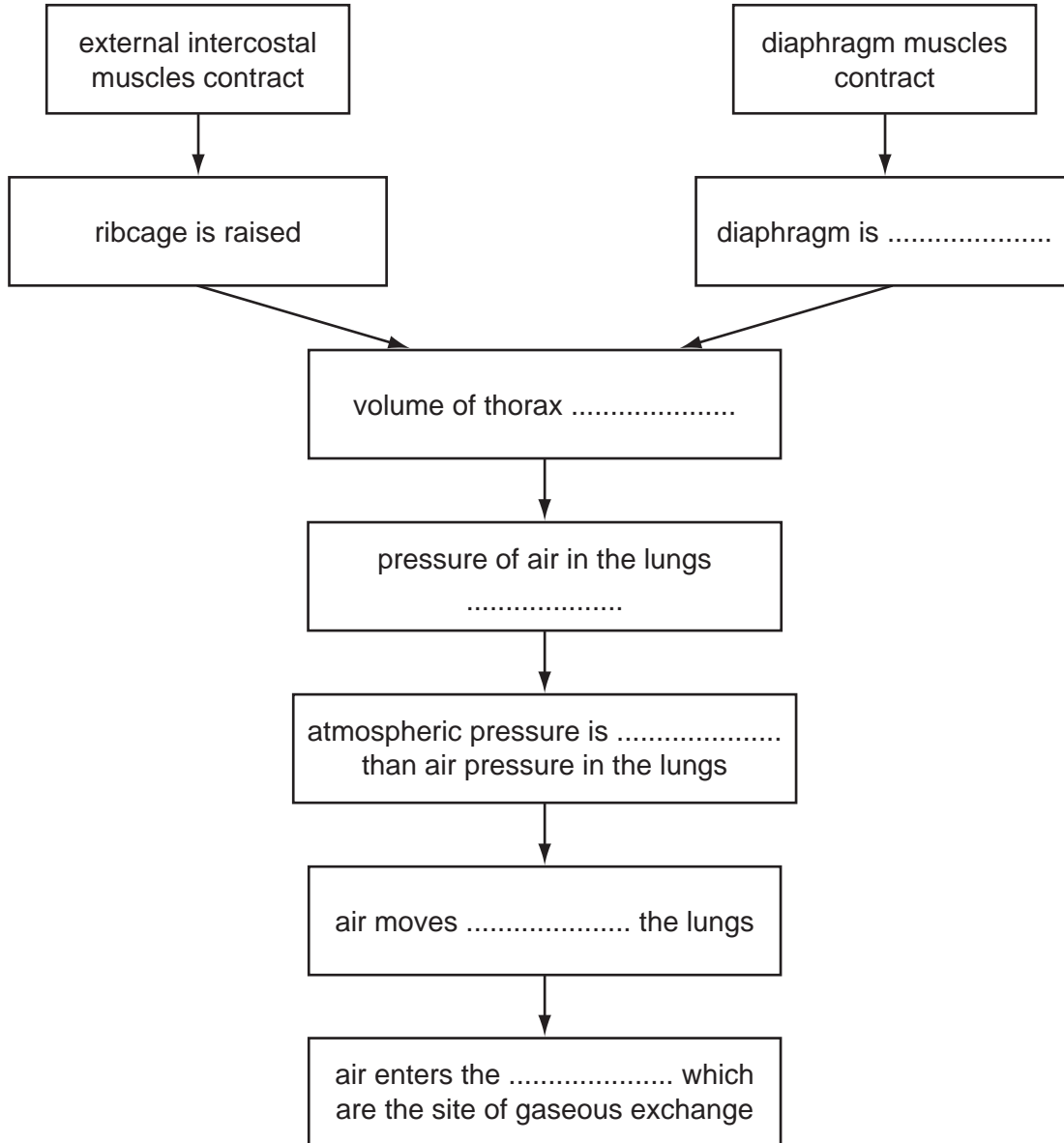


Fig. 3.1

(a) Complete Fig. 3.1 by writing appropriate words in the spaces provided.

[6]

(b) Fig. 3.2 shows part of the epithelium that lines the trachea.

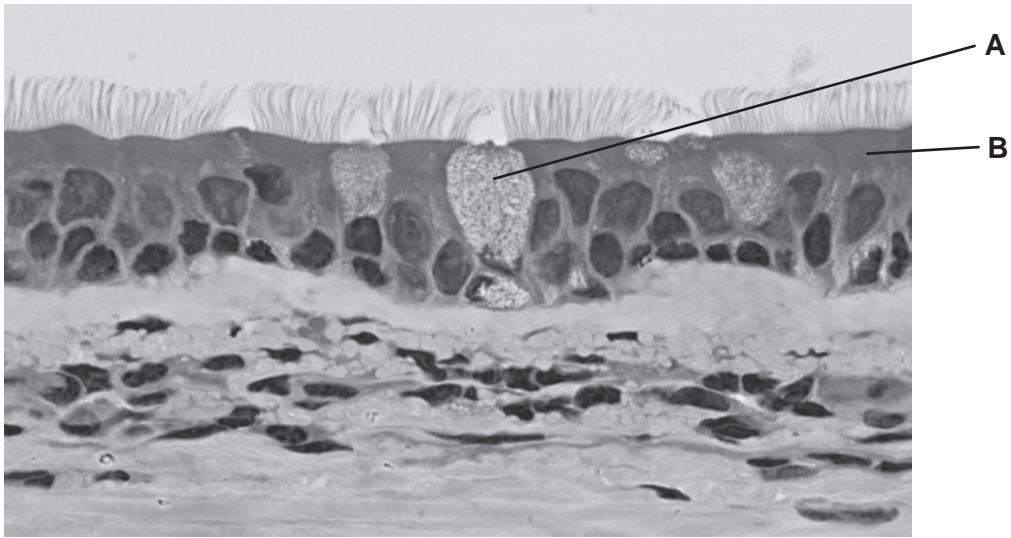


Fig. 3.2

Explain how the cells labelled **A** and **B** in Fig. 3.2 protect the gas exchange system.

A

.....

.....

.....

.....

B

.....

.....

.....

[4]

[Total: 10]

2 Fig. 3.1 shows structures in the human thorax.

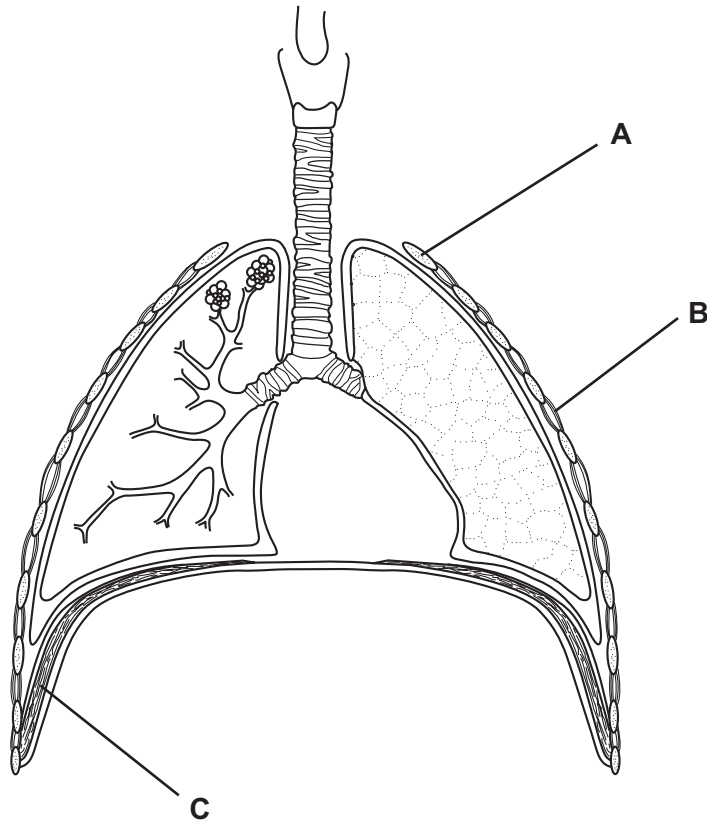


Fig. 3.1

(a) Complete the table by identifying parts **A**, **B** and **C** and describing their roles in breathing in.

part	name	role in breathing in
A
B
C

Fig. 3.2 shows some cells from the lining of the bronchus.

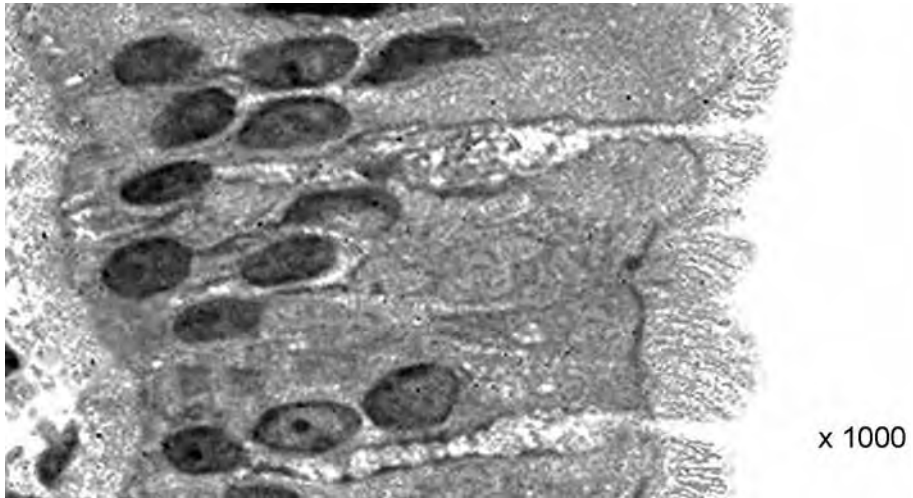


Fig. 3.2

(b) (i) Explain how these cells help to keep the bronchus free from dust and bacteria.

.....

.....

.....

.....

..... [4]

(ii) Describe how the actions **one named** compound of tobacco smoke.

.....

.....

..... [2]

[Total: 12]