

OCR Maths C2

Past Paper Pack

2005-2014

- 1 A sequence S has terms u_1, u_2, u_3, \dots defined by

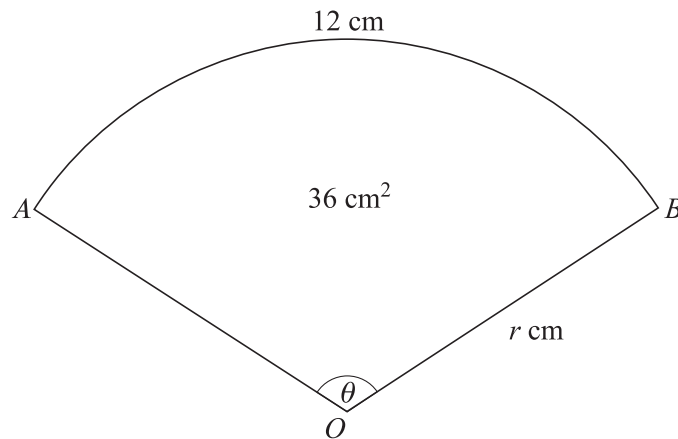
$$u_n = 3n - 1,$$

for $n \geq 1$.

- (i) Write down the values of u_1, u_2 and u_3 , and state what type of sequence S is. [3]

- (ii) Evaluate $\sum_{n=1}^{100} u_n$. [3]

2

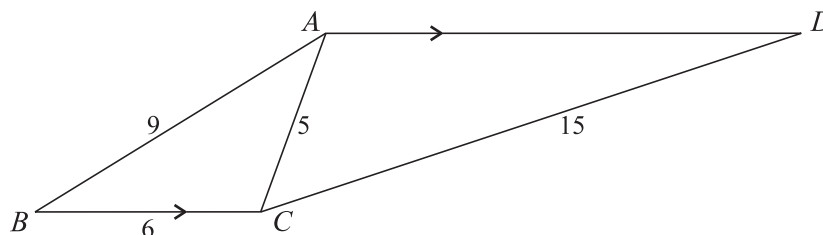


A sector OAB of a circle of radius r cm has angle θ radians. The length of the arc of the sector is 12 cm and the area of the sector is 36 cm^2 (see diagram).

- (i) Write down two equations involving r and θ . [2]
- (ii) Hence show that $r = 6$, and state the value of θ . [2]
- (iii) Find the area of the segment bounded by the arc AB and the chord AB . [3]
- 3 (i) Find $\int (2x + 1)(x + 3) dx$. [4]

- (ii) Evaluate $\int_0^9 \frac{1}{\sqrt{x}} dx$. [3]

4



In the diagram, $ABCD$ is a quadrilateral in which AD is parallel to BC . It is given that $AB = 9$, $BC = 6$, $CA = 5$ and $CD = 15$.

(i) Show that $\cos BCA = -\frac{1}{3}$, and hence find the value of $\sin BCA$. [4]

(ii) Find the angle ADC correct to the nearest 0.1° . [4]

5 The cubic polynomial $f(x)$ is given by

$$f(x) = x^3 + ax + b,$$

where a and b are constants. It is given that $(x + 1)$ is a factor of $f(x)$ and that the remainder when $f(x)$ is divided by $(x - 3)$ is 16.

(i) Find the values of a and b . [5]

(ii) Hence verify that $f(2) = 0$, and factorise $f(x)$ completely. [3]

6 (i) Find the binomial expansion of $\left(x^2 + \frac{1}{x}\right)^3$, simplifying the terms. [4]

(ii) Hence find $\int \left(x^2 + \frac{1}{x}\right)^3 dx$. [4]

7 (i) Evaluate $\log_5 15 + \log_5 20 - \log_5 12$. [3]

(ii) Given that $y = 3 \times 10^{2x}$, show that $x = a \log_{10}(by)$, where the values of the constants a and b are to be found. [4]

[Questions 8 and 9 are printed overleaf.]

- 8 The amounts of oil pumped from an oil well in each of the years 2001 to 2004 formed a geometric progression with common ratio 0.9. The amount pumped in 2001 was 100 000 barrels.

(i) Calculate the amount pumped in 2004. [2]

It is assumed that the amounts of oil pumped in future years will continue to follow the same geometric progression. Production from the well will stop at the end of the first year in which the amount pumped is less than 5000 barrels.

(ii) Calculate in which year the amount pumped will fall below 5000 barrels. [4]

(iii) Calculate the total amount of oil pumped from the well from the year 2001 up to and including the final year of production. [3]

- 9 (a) (i) Write down the exact values of $\cos \frac{1}{6}\pi$ and $\tan \frac{1}{3}\pi$ (where the angles are in radians). Hence verify that $x = \frac{1}{6}\pi$ is a solution of the equation

$$2 \cos x = \tan 2x. \quad [3]$$

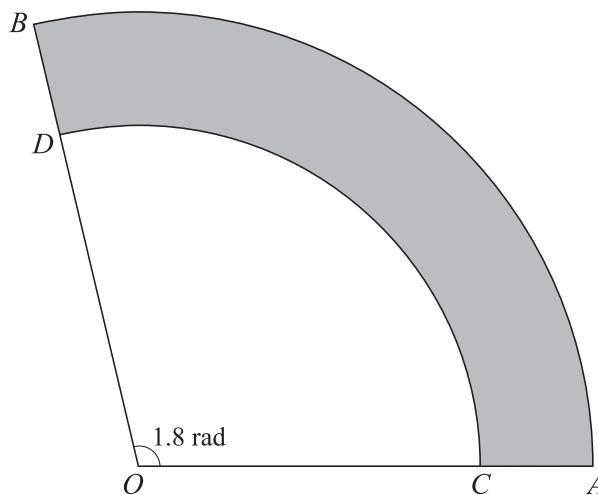
(ii) Sketch, on a single diagram, the graphs of $y = 2 \cos x$ and $y = \tan 2x$, for x (radians) such that $0 \leq x \leq \pi$. Hence state, in terms of π , the other values of x between 0 and π satisfying the equation

$$2 \cos x = \tan 2x. \quad [4]$$

- (b) (i) Use the trapezium rule, with 3 strips, to find an approximate value for the area of the region bounded by the curve $y = \tan x$, the x -axis, and the lines $x = 0.1$ and $x = 0.4$. (Values of x are in radians.) [4]
- (ii) State with a reason whether this approximation is an underestimate or an overestimate. [1]

- 1 The 20th term of an arithmetic progression is 10 and the 50th term is 70.
- (i) Find the first term and the common difference. [4]
 - (ii) Show that the sum of the first 29 terms is zero. [2]
- 2 Triangle ABC has $AB = 10$ cm, $BC = 7$ cm and angle $B = 80^\circ$. Calculate
- (i) the area of the triangle, [2]
 - (ii) the length of CA , [2]
 - (iii) the size of angle C . [2]
- 3 (i) Find the first three terms of the expansion, in ascending powers of x , of $(1 - 2x)^{12}$. [3]
- (ii) Hence find the coefficient of x^2 in the expansion of $(1 + 3x)(1 - 2x)^{12}$. [3]

4



The diagram shows a sector OAB of a circle with centre O . The angle AOB is 1.8 radians. The points C and D lie on OA and OB respectively. It is given that $OA = OB = 20$ cm and $OC = OD = 15$ cm. The shaded region is bounded by the arcs AB and CD and by the lines CA and DB .

- (i) Find the perimeter of the shaded region. [3]
- (ii) Find the area of the shaded region. [3]

- 5 In a geometric progression, the first term is 5 and the second term is 4.8.
- (i) Show that the sum to infinity is 125. [2]
- (ii) The sum of the first n terms is greater than 124. Show that
- $$0.96^n < 0.008,$$
- and use logarithms to calculate the smallest possible value of n . [6]
- 6 (a) Find $\int (x^{\frac{1}{2}} + 4) dx$. [4]
- (b) (i) Find the value, in terms of a , of $\int_1^a 4x^{-2} dx$, where a is a constant greater than 1. [3]
- (ii) Deduce the value of $\int_1^{\infty} 4x^{-2} dx$. [1]
- 7 (i) Express each of the following in terms of $\log_{10} x$ and $\log_{10} y$.
- (a) $\log_{10} \left(\frac{x}{y} \right)$ [1]
- (b) $\log_{10} (10x^2y)$ [3]
- (ii) Given that
- $$2 \log_{10} \left(\frac{x}{y} \right) = 1 + \log_{10} (10x^2y),$$
- find the value of y correct to 3 decimal places. [4]
- 8 The cubic polynomial $2x^3 + kx^2 - x + 6$ is denoted by $f(x)$. It is given that $(x + 1)$ is a factor of $f(x)$.
- (i) Show that $k = -5$, and factorise $f(x)$ completely. [6]
- (ii) Find $\int_{-1}^2 f(x) dx$. [4]
- (iii) Explain with the aid of a sketch why the answer to part (ii) does not give the area of the region between the curve $y = f(x)$ and the x -axis for $-1 \leq x \leq 2$. [2]

[Question 9 is printed overleaf.]

- 9 (i) Sketch, on a single diagram showing values of x from -180° to $+180^\circ$, the graphs of $y = \tan x$ and $y = 4 \cos x$. [3]

The equation

$$\tan x = 4 \cos x$$

has two roots in the interval $-180^\circ \leq x \leq 180^\circ$. These are denoted by α and β , where $\alpha < \beta$.

- (ii) Show α and β on your sketch, and express β in terms of α . [3]

- (iii) Show that the equation $\tan x = 4 \cos x$ may be written as

$$4 \sin^2 x + \sin x - 4 = 0.$$

Hence find the value of $\beta - \alpha$, correct to the nearest degree. [6]

1 Find the binomial expansion of $(3x - 2)^4$. [4]

2 A sequence of terms u_1, u_2, u_3, \dots is defined by

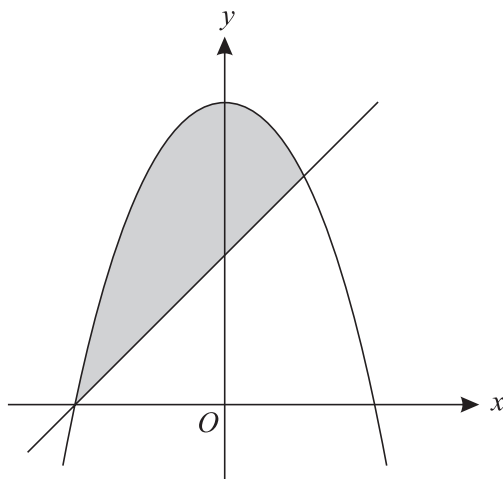
$$u_1 = 2 \quad \text{and} \quad u_{n+1} = 1 - u_n \text{ for } n \geq 1.$$

(i) Write down the values of u_2, u_3 and u_4 . [2]

(ii) Find $\sum_{n=1}^{100} u_n$. [3]

3 The gradient of a curve is given by $\frac{dy}{dx} = 2x^{-\frac{1}{2}}$, and the curve passes through the point $(4, 5)$. Find the equation of the curve. [6]

4



The diagram shows the curve $y = 4 - x^2$ and the line $y = x + 2$.

(i) Find the x -coordinates of the points of intersection of the curve and the line. [2]

(ii) Use integration to find the area of the shaded region bounded by the line and the curve. [6]

5 Solve each of the following equations, for $0^\circ \leq x \leq 180^\circ$.

(i) $2 \sin^2 x = 1 + \cos x$. [4]

(ii) $\sin 2x = -\cos 2x$. [4]

- 6 (i) John aims to pay a certain amount of money each month into a pension fund. He plans to pay £100 in the first month, and then to increase the amount paid by £5 each month, i.e. paying £105 in the second month, £110 in the third month, etc.

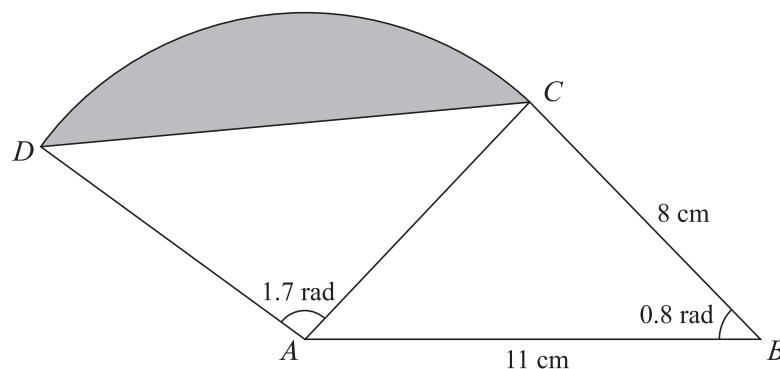
If John continues making payments according to this plan for 240 months, calculate

- (a) how much he will pay in the final month, [2]
 (b) how much he will pay altogether over the whole period. [2]

- (ii) Rachel also plans to pay money monthly into a pension fund over a period of 240 months, starting with £100 in the first month. Her monthly payments will form a geometric progression, and she will pay £1500 in the final month.

Calculate how much Rachel will pay altogether over the whole period. [5]

7



The diagram shows a triangle ABC , and a sector ACD of a circle with centre A . It is given that $AB = 11$ cm, $BC = 8$ cm, angle $ABC = 0.8$ radians and angle $DAC = 1.7$ radians. The shaded segment is bounded by the line DC and the arc DC .

- (i) Show that the length of AC is 7.90 cm, correct to 3 significant figures. [3]
 (ii) Find the area of the shaded segment. [3]
 (iii) Find the perimeter of the shaded segment. [4]
- 8 The cubic polynomial $2x^3 + ax^2 + bx - 10$ is denoted by $f(x)$. It is given that, when $f(x)$ is divided by $(x - 2)$, the remainder is 12. It is also given that $(x + 1)$ is a factor of $f(x)$.
- (i) Find the values of a and b . [6]
 (ii) Divide $f(x)$ by $(x + 2)$ to find the quotient and the remainder. [5]

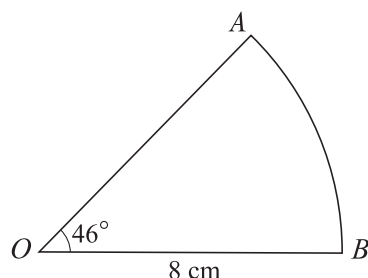
[Question 9 is printed overleaf.]

- 9 (i) Sketch the curve $y = \left(\frac{1}{2}\right)^x$, and state the coordinates of any point where the curve crosses an axis. [3]
- (ii) Use the trapezium rule, with 4 strips of width 0.5, to estimate the area of the region bounded by the curve $y = \left(\frac{1}{2}\right)^x$, the axes, and the line $x = 2$. [4]
- (iii) The point P on the curve $y = \left(\frac{1}{2}\right)^x$ has y -coordinate equal to $\frac{1}{6}$. Prove that the x -coordinate of P may be written as

$$1 + \frac{\log_{10} 3}{\log_{10} 2}. \quad [4]$$

- 1 In an arithmetic progression the first term is 15 and the twentieth term is 72. Find the sum of the first 100 terms. [4]

2



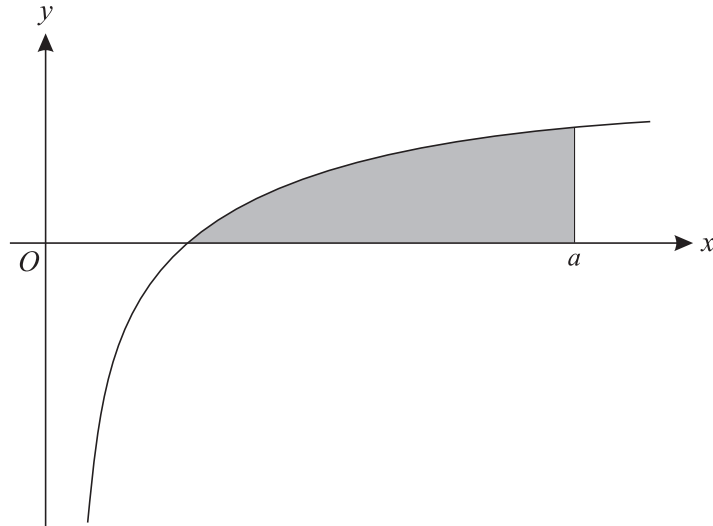
The diagram shows a sector OAB of a circle, centre O and radius 8 cm. The angle AOB is 46° .

- (i) Express 46° in radians, correct to 3 significant figures. [2]
- (ii) Find the length of the arc AB . [1]
- (iii) Find the area of the sector OAB . [2]
- 3 (i) Find $\int (4x - 5) dx$. [2]
- (ii) The gradient of a curve is given by $\frac{dy}{dx} = 4x - 5$. The curve passes through the point $(3, 7)$. Find the equation of the curve. [3]
- 4 In a triangle ABC , $AB = 5\sqrt{2}$ cm, $BC = 8$ cm and angle $B = 60^\circ$.
- (i) Find the exact area of the triangle, giving your answer as simply as possible. [3]
- (ii) Find the length of AC , correct to 3 significant figures. [3]
- 5 (a) (i) Express $\log_3(4x + 7) - \log_3 x$ as a single logarithm. [1]
- (ii) Hence solve the equation $\log_3(4x + 7) - \log_3 x = 2$. [3]
- (b) Use the trapezium rule, with two strips of width 3, to find an approximate value for
- $$\int_3^9 \log_{10} x dx,$$
- giving your answer correct to 3 significant figures. [4]

- 6 (i) Find and simplify the first four terms in the expansion of $(1 + 4x)^7$ in ascending powers of x . [4]
- (ii) In the expansion of
- $$(3 + ax)(1 + 4x)^7,$$
- the coefficient of x^2 is 1001. Find the value of a . [3]
- 7 (i) (a) Sketch the graph of $y = 2 \cos x$ for values of x such that $0^\circ \leq x \leq 360^\circ$, indicating the coordinates of any points where the curve meets the axes. [2]
- (b) Solve the equation $2 \cos x = 0.8$, giving all values of x between 0° and 360° . [3]
- (ii) Solve the equation $2 \cos x = \sin x$, giving all values of x between -180° and 180° . [3]
- 8 The polynomial $f(x)$ is defined by $f(x) = x^3 - 9x^2 + 7x + 33$.
- (i) Find the remainder when $f(x)$ is divided by $(x + 2)$. [2]
- (ii) Show that $(x - 3)$ is a factor of $f(x)$. [1]
- (iii) Solve the equation $f(x) = 0$, giving each root in an exact form as simply as possible. [6]
- 9 On its first trip between Malby and Grenlish, a steam train uses 1.5 tonnes of coal. As the train does more trips, it becomes less efficient so that each subsequent trip uses 2% more coal than the previous trip.
- (i) Show that the amount of coal used on the fifth trip is 1.624 tonnes, correct to 4 significant figures. [2]
- (ii) There are 39 tonnes of coal available. An engineer wishes to calculate N , the total number of trips possible. Show that N satisfies the inequality
- $$1.02^N \leq 1.52. \quad [4]$$
- (iii) Hence, by using logarithms, find the greatest number of trips possible. [4]

[Question 10 is printed overleaf.]

10



The diagram shows the graph of $y = 1 - 3x^{-\frac{1}{2}}$.

- (i) Verify that the curve intersects the x -axis at $(9, 0)$. [1]
- (ii) The shaded region is enclosed by the curve, the x -axis and the line $x = a$ (where $a > 9$). Given that the area of the shaded region is 4 square units, find the value of a . [9]

- 1 A geometric progression u_1, u_2, u_3, \dots is defined by

$$u_1 = 15 \quad \text{and} \quad u_{n+1} = 0.8u_n \quad \text{for } n \geq 1.$$

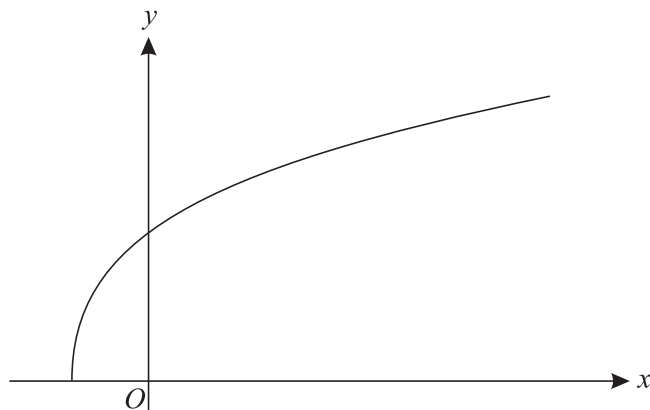
- (i) Write down the values of u_2, u_3 and u_4 . [2]

- (ii) Find $\sum_{n=1}^{20} u_n$. [3]

- 2 Expand $\left(x + \frac{2}{x}\right)^4$ completely, simplifying the terms. [5]

- 3 Use logarithms to solve the equation $3^{2x+1} = 5^{200}$, giving the value of x correct to 3 significant figures. [5]

4



The diagram shows the curve $y = \sqrt{4x + 1}$.

- (i) Use the trapezium rule, with strips of width 0.5, to find an approximate value for the area of the region bounded by the curve $y = \sqrt{4x + 1}$, the x -axis, and the lines $x = 1$ and $x = 3$. Give your answer correct to 3 significant figures. [4]

- (ii) State with a reason whether this approximation is an under-estimate or an over-estimate. [2]

- 5 (i) Show that the equation

$$3 \cos^2 \theta = \sin \theta + 1$$

can be expressed in the form

$$3 \sin^2 \theta + \sin \theta - 2 = 0. \quad [2]$$

- (ii) Hence solve the equation

$$3 \cos^2 \theta = \sin \theta + 1,$$

giving all values of θ between 0° and 360° . [5]

6 (a) (i) Find $\int x(x^2 - 4) dx$. [3]

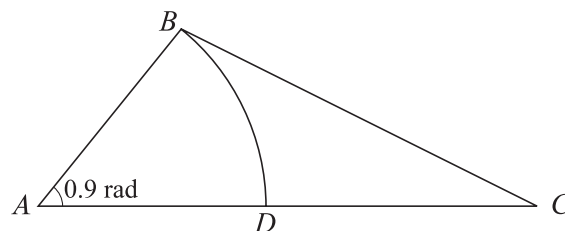
(ii) Hence evaluate $\int_1^6 x(x^2 - 4) dx$. [2]

(b) Find $\int \frac{6}{x^3} dx$. [3]

7 (a) In an arithmetic progression, the first term is 12 and the sum of the first 70 terms is 12 915. Find the common difference. [4]

(b) In a geometric progression, the second term is -4 and the sum to infinity is 9. Find the common ratio. [7]

8



The diagram shows a triangle ABC , where angle BAC is 0.9 radians. BAD is a sector of the circle with centre A and radius AB .

(i) The area of the sector BAD is 16.2 cm^2 . Show that the length of AB is 6 cm. [2]

(ii) The area of triangle ABC is twice the area of sector BAD . Find the length of AC . [3]

(iii) Find the perimeter of the region BCD . [6]

9 The polynomial $f(x)$ is given by

$$f(x) = x^3 + 6x^2 + x - 4.$$

(i) (a) Show that $(x + 1)$ is a factor of $f(x)$. [1]

(b) Hence find the exact roots of the equation $f(x) = 0$. [6]

(ii) (a) Show that the equation

$$2 \log_2(x + 3) + \log_2 x - \log_2(4x + 2) = 1$$

can be written in the form $f(x) = 0$. [5]

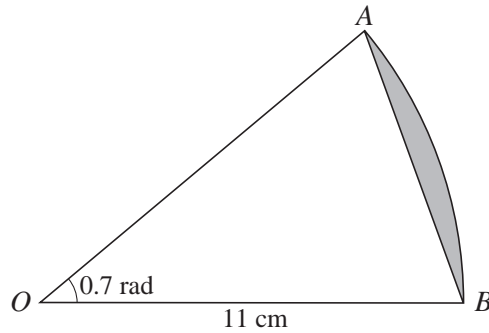
(b) Explain why the equation

$$2 \log_2(x + 3) + \log_2 x - \log_2(4x + 2) = 1$$

has only one real root and state the exact value of this root. [2]

Jan 2008

1



The diagram shows a sector AOB of a circle with centre O and radius 11 cm. The angle AOB is 0.7 radians. Find the area of the segment shaded in the diagram. [4]

2 Use the trapezium rule, with 3 strips each of width 2, to estimate the value of

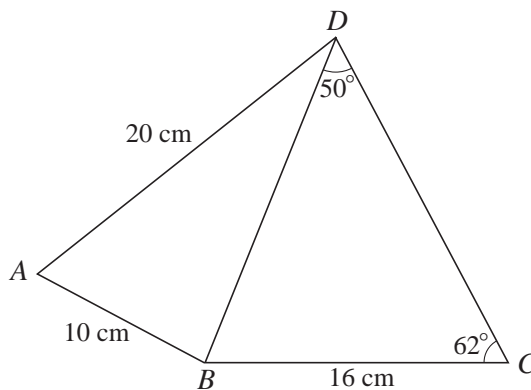
$$\int_1^7 \sqrt{x^2 + 3} \, dx. \quad [4]$$

3 Express each of the following as a single logarithm:

(i) $\log_a 2 + \log_a 3,$ [1]

(ii) $2 \log_{10} x - 3 \log_{10} y.$ [3]

4



In the diagram, angle $BDC = 50^\circ$ and angle $BCD = 62^\circ$. It is given that $AB = 10$ cm, $AD = 20$ cm and $BC = 16$ cm.

(i) Find the length of BD . [2]

(ii) Find angle BAD . [3]

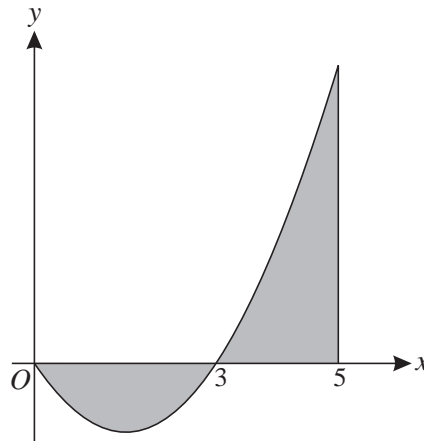
5 The gradient of a curve is given by $\frac{dy}{dx} = 12\sqrt{x}$. The curve passes through the point $(4, 50)$. Find the equation of the curve. [6]

- 6 A sequence of terms u_1, u_2, u_3, \dots is defined by

$$u_n = 2n + 5, \quad \text{for } n \geq 1.$$

- (i) Write down the values of u_1, u_2 and u_3 . [2]
- (ii) State what type of sequence it is. [1]
- (iii) Given that $\sum_{n=1}^N u_n = 2200$, find the value of N . [5]

7



The diagram shows part of the curve $y = x^2 - 3x$ and the line $x = 5$.

- (i) Explain why $\int_0^5 (x^2 - 3x) dx$ does not give the total area of the regions shaded in the diagram. [1]
- (ii) Use integration to find the exact total area of the shaded regions. [7]
- 8 The first term of a geometric progression is 10 and the common ratio is 0.8.
- (i) Find the fourth term. [2]
- (ii) Find the sum of the first 20 terms, giving your answer correct to 3 significant figures. [2]
- (iii) The sum of the first N terms is denoted by S_N , and the sum to infinity is denoted by S_∞ .

Show that the inequality $S_\infty - S_N < 0.01$ can be written as

$$0.8^N < 0.0002,$$

and use logarithms to find the smallest possible value of N . [7]

9 (i)

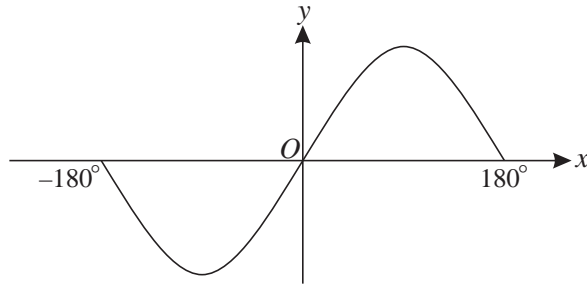


Fig. 1

Fig. 1 shows the curve $y = 2 \sin x$ for values of x such that $-180^\circ \leq x \leq 180^\circ$. State the coordinates of the maximum and minimum points on this part of the curve. [2]

(ii)

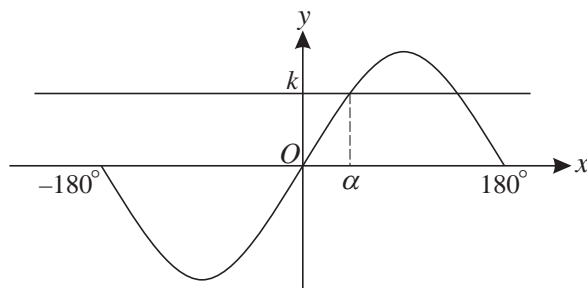


Fig. 2

Fig. 2 shows the curve $y = 2 \sin x$ and the line $y = k$. The smallest positive solution of the equation $2 \sin x = k$ is denoted by α . State, in terms of α , and in the range $-180^\circ \leq x \leq 180^\circ$,

(a) another solution of the equation $2 \sin x = k$, [1]

(b) one solution of the equation $2 \sin x = -k$. [1]

(iii) Find the x -coordinates of the points where the curve $y = 2 \sin x$ intersects the curve $y = 2 - 3 \cos^2 x$, for values of x such that $-180^\circ \leq x \leq 180^\circ$. [6]

10 (i) Find the binomial expansion of $(2x + 5)^4$, simplifying the terms. [4]

(ii) Hence show that $(2x + 5)^4 - (2x - 5)^4$ can be written as

$$320x^3 + kx,$$

where the value of the constant k is to be stated. [2]

(iii) Verify that $x = 2$ is a root of the equation

$$(2x + 5)^4 - (2x - 5)^4 = 3680x - 800,$$

and find the other possible values of x . [6]

Permission to reproduce items where third-party owned material protected by copyright is included has been sought and cleared where possible. Every reasonable effort has been made by the publisher (OCR) to trace copyright holders, but if any items requiring clearance have unwittingly been included, the publisher will be pleased to make amends at the earliest possible opportunity.

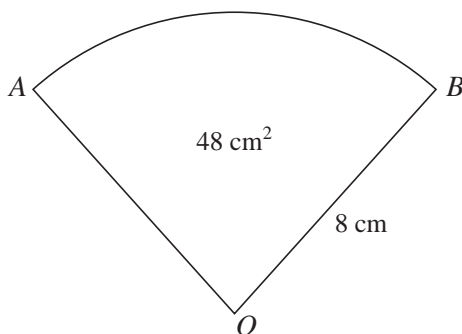
OCR is part of the Cambridge Assessment Group. Cambridge Assessment is the brand name of University of Cambridge Local Examinations Syndicate (UCLES), which is itself a department of the University of Cambridge.

- 1 Find and simplify the first three terms in the expansion of $(2 - 3x)^6$ in ascending powers of x . [4]
- 2 A sequence u_1, u_2, u_3, \dots is defined by

$$u_1 = 3 \quad \text{and} \quad u_{n+1} = 1 - \frac{1}{u_n} \quad \text{for } n \geq 1.$$

- (i) Write down the values of u_2, u_3 and u_4 . [3]
- (ii) Describe the behaviour of the sequence. [1]

3

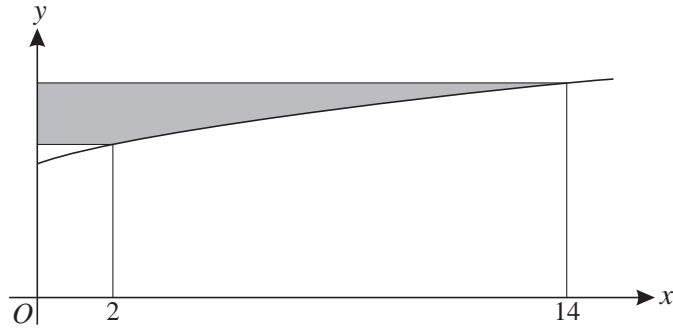


The diagram shows a sector AOB of a circle with centre O and radius 8 cm. The area of the sector is 48 cm^2 .

- (i) Find angle AOB , giving your answer in radians. [2]
- (ii) Find the area of the segment bounded by the arc AB and the chord AB . [3]
- 4 The cubic polynomial $ax^3 - 4x^2 - 7ax + 12$ is denoted by $f(x)$.
- (i) Given that $(x - 3)$ is a factor of $f(x)$, find the value of the constant a . [3]
- (ii) Using this value of a , find the remainder when $f(x)$ is divided by $(x + 2)$. [2]

June 2008

5



The diagram shows the curve $y = 3 + \sqrt{x+2}$.

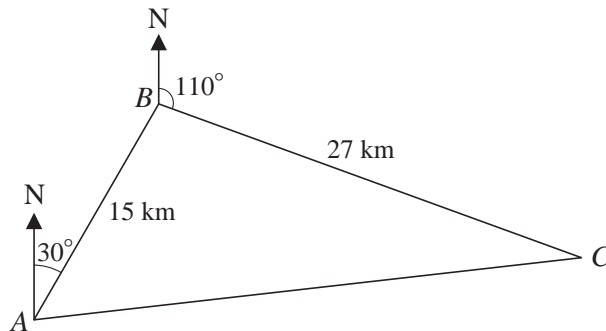
The shaded region is bounded by the curve, the y -axis, and two lines parallel to the x -axis which meet the curve where $x = 2$ and $x = 14$.

(i) Show that the area of the shaded region is given by

$$\int_5^7 (y^2 - 6y + 7) dy. \quad [3]$$

(ii) Hence find the exact area of the shaded region. [4]

6



In the diagram, a lifeboat station is at point A . A distress call is received and the lifeboat travels 15 km on a bearing of 030° to point B . A second call is received and the lifeboat then travels 27 km on a bearing of 110° to arrive at point C . The lifeboat then travels back to the station at A .

(i) Show that angle ABC is 100° . [1]

(ii) Find the distance that the lifeboat has to travel to get from C back to A . [2]

(iii) Find the bearing on which the lifeboat has to travel to get from C to A . [4]

7 (a) Find $\int x^3(x^2 - x + 5) dx$. [4]

(b) (i) Find $\int 18x^{-4} dx$. [2]

(ii) Hence evaluate $\int_2^\infty 18x^{-4} dx$. [2]

- 8 (i) Sketch the curve $y = 2 \times 3^x$, stating the coordinates of any intersections with the axes. [3]
- (ii) The curve $y = 2 \times 3^x$ intersects the curve $y = 8^x$ at the point P . Show that the x -coordinate of P may be written as

$$\frac{1}{3 - \log_2 3}. \quad [5]$$

- 9 (a) (i) Show that the equation

$$2 \sin x \tan x - 5 = \cos x$$

can be expressed in the form

$$3 \cos^2 x + 5 \cos x - 2 = 0. \quad [3]$$

- (ii) Hence solve the equation

$$2 \sin x \tan x - 5 = \cos x,$$

giving all values of x , in radians, for $0 \leq x \leq 2\pi$. [4]

- (b) Use the trapezium rule, with four strips each of width 0.25, to find an approximate value for

$$\int_0^1 \cos x \, dx,$$

where x is in radians. Give your answer correct to 3 significant figures. [4]

- 10 Jamie is training for a triathlon, which involves swimming, running and cycling.

- On Day 1, he swims 2 km and then swims the same distance on each subsequent day.
- On Day 1, he runs 2 km and, on each subsequent day, he runs 0.5 km further than on the previous day. (Thus he runs 2.5 km on Day 2, 3 km on Day 3, and so on.)
- On Day 1 he cycles 2 km and, on each subsequent day, he cycles a distance 10% further than on the previous day.

- (i) Find how far Jamie runs on Day 15. [2]

- (ii) Verify that the distance cycled in a day first exceeds 12 km on Day 20. [3]

- (iii) Find the day on which the total distance cycled, up to and including that day, first exceeds 200 km. [4]

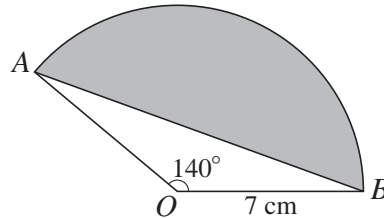
- (iv) Find the total distance travelled, by swimming, running and cycling, up to and including Day 30. [4]

1 Find

(i) $\int (x^3 + 8x - 5) dx$, [3]

(ii) $\int 12\sqrt{x} dx$. [3]

2



The diagram shows a sector OAB of a circle, centre O and radius 7 cm. The angle AOB is 140° .

(i) Express 140° in radians, giving your answer in an exact form as simply as possible. [2]

(ii) Find the perimeter of the segment shaded in the diagram, giving your answer correct to 3 significant figures. [4]

3 A sequence of terms u_1, u_2, u_3, \dots is defined by

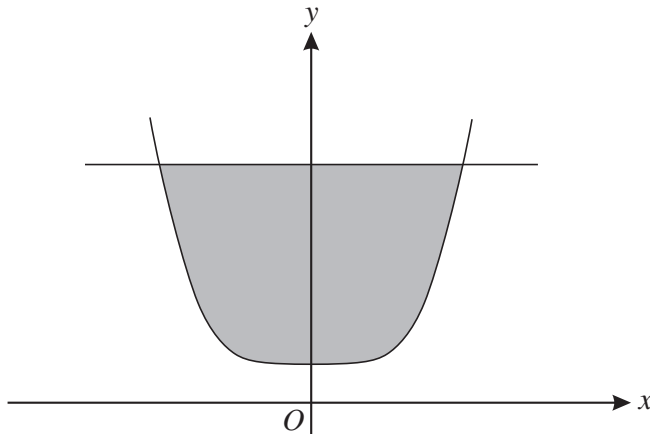
$$u_n = 24 - \frac{2}{3}n.$$

(i) Write down the exact values of u_1, u_2 and u_3 . [2]

(ii) Find the value of k such that $u_k = 0$. [2]

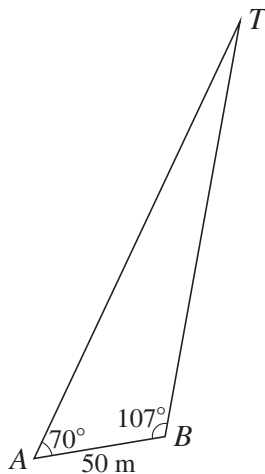
(iii) Find $\sum_{n=1}^{20} u_n$. [3]

4



The diagram shows the curve $y = x^4 + 3$ and the line $y = 19$ which intersect at $(-2, 19)$ and $(2, 19)$. Use integration to find the exact area of the shaded region enclosed by the curve and the line. [7]

5



Some walkers see a tower, T , in the distance and want to know how far away it is. They take a bearing from a point A and then walk for 50 m in a straight line before taking another bearing from a point B . They find that angle TAB is 70° and angle TBA is 107° (see diagram).

- (i) Find the distance of the tower from A . [2]
- (ii) They continue walking in the same direction for another 100 m to a point C , so that AC is 150 m. What is the distance of the tower from C ? [3]
- (iii) Find the shortest distance of the walkers from the tower as they walk from A to C . [2]

6 A geometric progression has first term 20 and common ratio 0.9.

- (i) Find the sum to infinity. [2]
- (ii) Find the sum of the first 30 terms. [2]
- (iii) Use logarithms to find the smallest value of p such that the p th term is less than 0.4. [4]

Jan 2009

- 7 In the binomial expansion of $(k + ax)^4$ the coefficient of x^2 is 24.
- (i) Given that a and k are both positive, show that $ak = 2$. [3]
- (ii) Given also that the coefficient of x in the expansion is 128, find the values of a and k . [4]
- (iii) Hence find the coefficient of x^3 in the expansion. [2]
- 8 (a) Given that $\log_a x = p$ and $\log_a y = q$, express the following in terms of p and q .
- (i) $\log_a(xy)$ [1]
- (ii) $\log_a\left(\frac{a^2x^3}{y}\right)$ [3]
- (b) (i) Express $\log_{10}(x^2 - 10) - \log_{10}x$ as a single logarithm. [1]
- (ii) Hence solve the equation $\log_{10}(x^2 - 10) - \log_{10}x = 2 \log_{10}3$. [5]
- 9 (i) The polynomial $f(x)$ is defined by
- $$f(x) = x^3 - x^2 - 3x + 3.$$
- Show that $x = 1$ is a root of the equation $f(x) = 0$, and hence find the other two roots. [6]
- (ii) Hence solve the equation
- $$\tan^3 x - \tan^2 x - 3 \tan x + 3 = 0$$
- for $0 \leq x \leq 2\pi$. Give each solution for x in an exact form. [6]

- 1 The lengths of the three sides of a triangle are 6.4 cm, 7.0 cm and 11.3 cm.
- (i) Find the largest angle in the triangle. [3]
- (ii) Find the area of the triangle. [2]
- 2 The tenth term of an arithmetic progression is equal to twice the fourth term. The twentieth term of the progression is 44.
- (i) Find the first term and the common difference. [4]
- (ii) Find the sum of the first 50 terms. [2]
- 3 Use logarithms to solve the equation $7^x = 2^{x+1}$, giving the value of x correct to 3 significant figures. [5]
- 4 (i) Find the binomial expansion of $(x^2 - 5)^3$, simplifying the terms. [4]
- (ii) Hence find $\int (x^2 - 5)^3 dx$. [4]
- 5 Solve each of the following equations for $0^\circ \leq x \leq 180^\circ$.
- (i) $\sin 2x = 0.5$ [3]
- (ii) $2 \sin^2 x = 2 - \sqrt{3} \cos x$ [5]
- 6 The gradient of a curve is given by $\frac{dy}{dx} = 3x^2 + a$, where a is a constant. The curve passes through the points $(-1, 2)$ and $(2, 17)$. Find the equation of the curve. [8]
- 7 The polynomial $f(x)$ is given by $f(x) = 2x^3 + 9x^2 + 11x - 8$.
- (i) Find the remainder when $f(x)$ is divided by $(x + 2)$. [2]
- (ii) Use the factor theorem to show that $(2x - 1)$ is a factor of $f(x)$. [2]
- (iii) Express $f(x)$ as a product of a linear factor and a quadratic factor. [3]
- (iv) State the number of real roots of the equation $f(x) = 0$, giving a reason for your answer. [2]

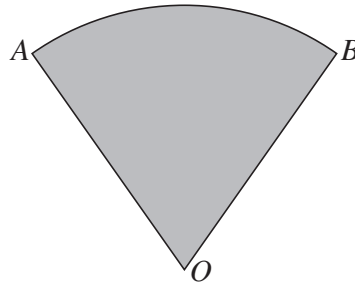


Fig. 1

Fig. 1 shows a sector AOB of a circle, centre O and radius OA . The angle AOB is 1.2 radians and the area of the sector is 60 cm^2 .

- (i) Find the perimeter of the sector. [4]

A pattern on a T-shirt, the start of which is shown in Fig. 2, consists of a sequence of similar sectors. The first sector in the pattern is sector AOB from Fig. 1, and the area of each successive sector is $\frac{3}{5}$ of the area of the previous one.

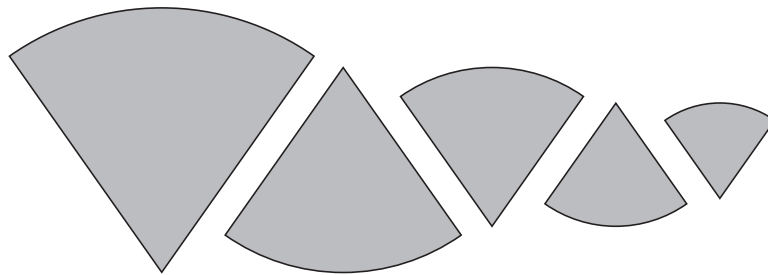


Fig. 2

- (ii) (a) Find the area of the fifth sector in the pattern. [2]
 (b) Find the total area of the first ten sectors in the pattern. [2]
 (c) Explain why the total area will never exceed a certain limit, no matter how many sectors are used, and state the value of this limit. [3]

- 9 (i) Sketch the graph of $y = 4k^x$, where k is a constant such that $k > 1$. State the coordinates of any points of intersection with the axes. [2]

- (ii) The point P on the curve $y = 4k^x$ has its y -coordinate equal to $20k^2$. Show that the x -coordinate of P may be written as $2 + \log_k 5$. [4]

- (iii) (a) Use the trapezium rule, with two strips each of width $\frac{1}{2}$, to find an expression for the approximate value of

$$\int_0^1 4k^x \, dx. \quad [3]$$

- (b) Given that this approximate value is equal to 16, find the value of k . [3]

- 1 (i) Show that the equation

$$2 \sin^2 x = 5 \cos x - 1$$

can be expressed in the form

$$2 \cos^2 x + 5 \cos x - 3 = 0. \quad [2]$$

- (ii) Hence solve the equation

$$2 \sin^2 x = 5 \cos x - 1,$$

giving all values of x between 0° and 360° . [4]

- 2 The gradient of a curve is given by $\frac{dy}{dx} = 6x - 4$. The curve passes through the distinct points $(2, 5)$ and $(p, 5)$.

(i) Find the equation of the curve. [4]

(ii) Find the value of p . [3]

- 3 (i) Find and simplify the first four terms in the expansion of $(2 - x)^7$ in ascending powers of x . [4]

(ii) Hence find the coefficient of w^6 in the expansion of $(2 - \frac{1}{4}w^2)^7$. [2]

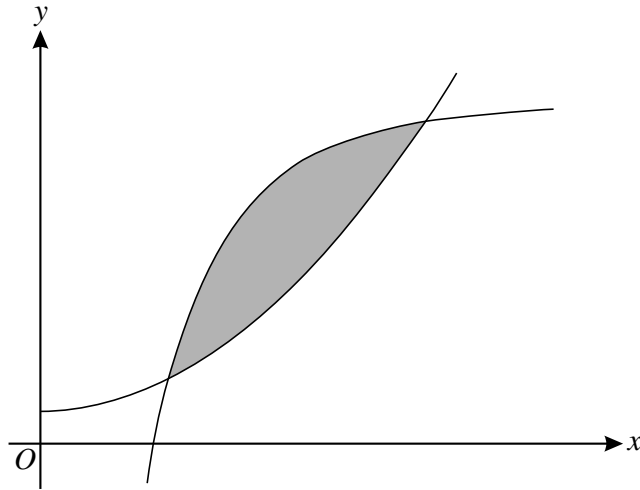
- 4 (i) Use the trapezium rule, with 4 strips each of width 0.5, to find an approximate value for

$$\int_3^5 \log_{10}(2 + x) dx,$$

giving your answer correct to 3 significant figures. [4]

(ii) Use your answer to part (i) to deduce an approximate value for $\int_3^5 \log_{10} \sqrt{2 + x} dx$, showing your method clearly. [2]

5



The diagram shows parts of the curves $y = x^2 + 1$ and $y = 11 - \frac{9}{x^2}$, which intersect at $(1, 2)$ and $(3, 10)$. Use integration to find the exact area of the shaded region enclosed between the two curves. [7]

6 The cubic polynomial $f(x)$ is given by

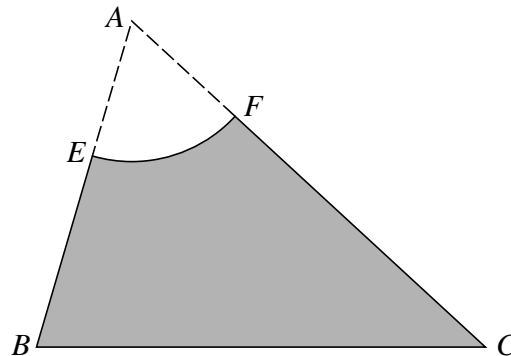
$$f(x) = 2x^3 + ax^2 + bx + 15,$$

where a and b are constants. It is given that $(x + 3)$ is a factor of $f(x)$ and that, when $f(x)$ is divided by $(x - 2)$, the remainder is 35.

(i) Find the values of a and b . [6]

(ii) Using these values of a and b , divide $f(x)$ by $(x + 3)$. [3]

7



The diagram shows triangle ABC , with $AB = 10$ cm, $BC = 13$ cm and $CA = 14$ cm. E and F are points on AB and AC respectively such that $AE = AF = 4$ cm. The sector AEF of a circle with centre A is removed to leave the shaded region $EBCF$.

(i) Show that angle CAB is 1.10 radians, correct to 3 significant figures. [2]

(ii) Find the perimeter of the shaded region $EBCF$. [3]

(iii) Find the area of the shaded region $EBCF$. [5]

8 A sequence u_1, u_2, u_3, \dots is defined by

$$u_1 = 8 \quad \text{and} \quad u_{n+1} = u_n + 3.$$

(i) Show that $u_5 = 20$. [2]

(ii) The n th term of the sequence can be written in the form $u_n = pn + q$. State the values of p and q . [2]

(iii) State what type of sequence it is. [1]

(iv) Find the value of N such that $\sum_{n=1}^{2N} u_n - \sum_{n=1}^N u_n = 1256$. [5]

9 (i) Sketch the curve $y = 6 \times 5^x$, stating the coordinates of any points of intersection with the axes. [3]

(ii) The point P on the curve $y = 9^x$ has y -coordinate equal to 150. Use logarithms to find the x -coordinate of P , correct to 3 significant figures. [3]

(iii) The curves $y = 6 \times 5^x$ and $y = 9^x$ intersect at the point Q . Show that the x -coordinate of Q can be written as $x = \frac{1 + \log_3 2}{2 - \log_3 5}$. [5]

Copyright Information

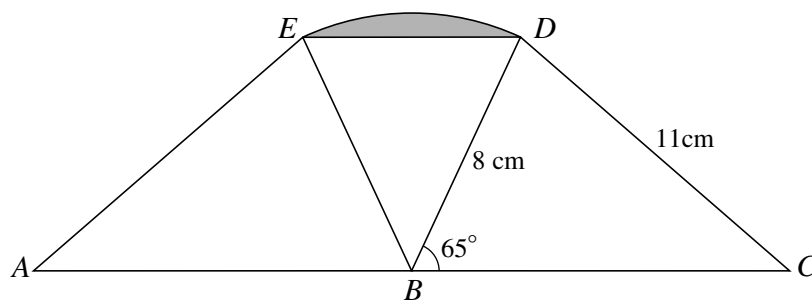
OCR is committed to seeking permission to reproduce all third-party content that it uses in its assessment materials. OCR has attempted to identify and contact all copyright holders whose work is used in this paper. To avoid the issue of disclosure of answer-related information to candidates, all copyright acknowledgements are reproduced in the OCR Copyright Acknowledgements Booklet. This is produced for each series of examinations, is given to all schools that receive assessment material and is freely available to download from our public website (www.ocr.org.uk) after the live examination series.

If OCR has unwittingly failed to correctly acknowledge or clear any third-party content in this assessment material, OCR will be happy to correct its mistake at the earliest possible opportunity. For queries or further information please contact the Copyright Team, First Floor, 9 Hills Road, Cambridge CB2 1GE.

OCR is part of the Cambridge Assessment Group; Cambridge Assessment is the brand name of University of Cambridge Local Examinations Syndicate (UCLES), which is itself a department of the University of Cambridge.

- 1 The cubic polynomial $f(x)$ is defined by $f(x) = x^3 + ax^2 - ax - 14$, where a is a constant.
- (i) Given that $(x - 2)$ is a factor of $f(x)$, find the value of a . [3]
- (ii) Using this value of a , find the remainder when $f(x)$ is divided by $(x + 1)$. [2]
- 2 (i) Use the trapezium rule, with 3 strips each of width 3, to estimate the area of the region bounded by the curve $y = \sqrt[3]{7+x}$, the x -axis, and the lines $x = 1$ and $x = 10$. Give your answer correct to 3 significant figures. [4]
- (ii) Explain how the trapezium rule could be used to obtain a more accurate estimate of the area. [1]
- 3 (i) Find and simplify the first four terms in the binomial expansion of $(1 + \frac{1}{2}x)^{10}$ in ascending powers of x . [4]
- (ii) Hence find the coefficient of x^3 in the expansion of $(3 + 4x + 2x^2)(1 + \frac{1}{2}x)^{10}$. [3]
- 4 A sequence u_1, u_2, u_3, \dots is defined by $u_n = 5n + 1$.
- (i) State the values of u_1, u_2 and u_3 . [1]
- (ii) Evaluate $\sum_{n=1}^{40} u_n$. [3]
- Another sequence w_1, w_2, w_3, \dots is defined by $w_1 = 2$ and $w_{n+1} = 5w_n + 1$.
- (iii) Find the value of p such that $u_p = w_3$. [3]

5



The diagram shows two congruent triangles, BCD and BAE , where ABC is a straight line. In triangle BCD , $BD = 8$ cm, $CD = 11$ cm and angle $CBD = 65^\circ$. The points E and D are joined by an arc of a circle with centre B and radius 8 cm.

- (i) Find angle BCD . [2]
- (ii) (a) Show that angle EBD is 0.873 radians, correct to 3 significant figures. [2]
- (b) Hence find the area of the shaded segment bounded by the chord ED and the arc ED , giving your answer correct to 3 significant figures. [4]

- 6 (a) Use integration to find the exact area of the region enclosed by the curve $y = x^2 + 4x$, the x -axis and the lines $x = 3$ and $x = 5$. [4]
- (b) Find $\int (2 - 6\sqrt{y}) \, dy$. [3]
- (c) Evaluate $\int_1^{\infty} \frac{8}{x^3} \, dx$. [4]
- 7 (i) Show that $\frac{\sin^2 x - \cos^2 x}{1 - \sin^2 x} \equiv \tan^2 x - 1$. [2]
- (ii) Hence solve the equation
- $$\frac{\sin^2 x - \cos^2 x}{1 - \sin^2 x} = 5 - \tan x,$$
- for $0^\circ \leq x \leq 360^\circ$. [6]
- 8 (a) Use logarithms to solve the equation $5^{3w-1} = 4^{250}$, giving the value of w correct to 3 significant figures. [5]
- (b) Given that $\log_x(5y + 1) - \log_x 3 = 4$, express y in terms of x . [4]
- 9 A geometric progression has first term a and common ratio r , and the terms are all different. The first, second and fourth terms of the geometric progression form the first three terms of an arithmetic progression.
- (i) Show that $r^3 - 2r + 1 = 0$. [3]
- (ii) Given that the geometric progression converges, find the exact value of r . [5]
- (iii) Given also that the sum to infinity of this geometric progression is $3 + \sqrt{5}$, find the value of the integer a . [4]

1 (i) Find and simplify the first three terms, in ascending powers of x , in the binomial expansion of $(1 + 2x)^7$. [3]

(ii) Hence find the coefficient of x^2 in the expansion of $(2 - 5x)(1 + 2x)^7$. [3]

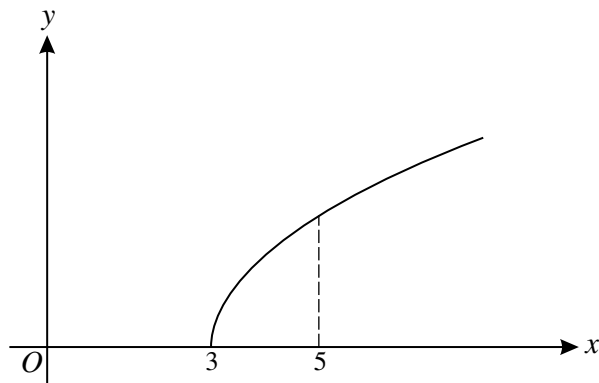
2 A sequence S has terms u_1, u_2, u_3, \dots defined by $u_n = 3n + 2$ for $n \geq 1$.

(i) Write down the values of u_1, u_2 and u_3 . [2]

(ii) State what type of sequence S is. [1]

(iii) Find $\sum_{n=101}^{200} u_n$. [3]

3



The diagram shows the curve $y = \sqrt{x - 3}$.

(i) Use the trapezium rule, with 4 strips each of width 0.5, to find an approximate value for the area of the region bounded by the curve, the x -axis and the line $x = 5$. Give your answer correct to 3 significant figures. [4]

(ii) State, with a reason, whether this approximation is an underestimate or an overestimate. [2]

4 (a) Use logarithms to solve the equation $5^{x-1} = 120$, giving your answer correct to 3 significant figures. [4]

(b) Solve the equation $\log_2 x + 2 \log_2 3 = \log_2(x + 5)$. [4]

5 In a geometric progression, the sum to infinity is four times the first term.

(i) Show that the common ratio is $\frac{3}{4}$. [3]

(ii) Given that the third term is 9, find the first term. [3]

(iii) Find the sum of the first twenty terms. [2]

6 (a) Find $\int \frac{x^3 + 3x^{\frac{1}{2}}}{x} dx$. [4]

(b) (i) Find, in terms of a , the value of $\int_2^a 6x^{-4} dx$, where a is a constant greater than 2. [3]

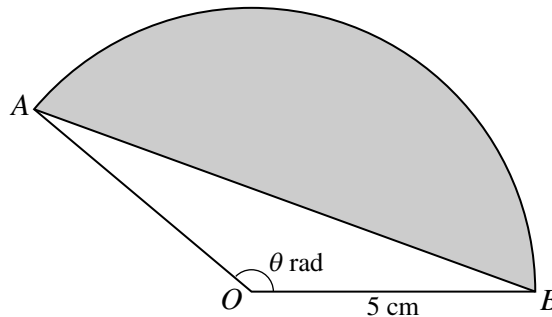
(ii) Deduce the value of $\int_2^{\infty} 6x^{-4} dx$. [1]

7 Solve each of the following equations for $0^\circ \leq x \leq 180^\circ$.

(i) $3 \tan 2x = 1$ [3]

(ii) $3 \cos^2 x + 2 \sin x - 3 = 0$ [5]

8



The diagram shows a sector AOB of a circle with centre O and radius 5 cm. Angle AOB is θ radians. The area of triangle AOB is 8 cm^2 .

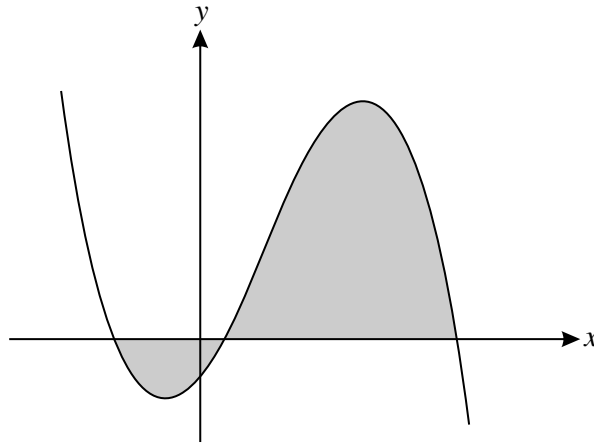
(i) Given that the angle θ is obtuse, find θ . [3]

The shaded segment in the diagram is bounded by the chord AB and the arc AB .

(ii) Find the area of the segment, giving your answer correct to 3 significant figures. [3]

(iii) Find the perimeter of the segment, giving your answer correct to 3 significant figures. [4]

[Question 9 is printed overleaf.]



The diagram shows the curve $y = f(x)$, where $f(x) = -4x^3 + 9x^2 + 10x - 3$.

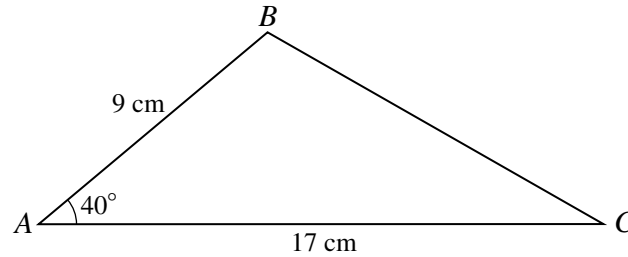
- (i) Verify that the curve crosses the x -axis at $(3, 0)$ and hence state a factor of $f(x)$. [2]
- (ii) Express $f(x)$ as the product of a linear factor and a quadratic factor. [3]
- (iii) Hence find the other two points of intersection of the curve with the x -axis. [2]
- (iv) The region enclosed by the curve and the x -axis is shaded in the diagram. Use integration to find the total area of this region. [5]

Copyright Information

OCR is committed to seeking permission to reproduce all third-party content that it uses in its assessment materials. OCR has attempted to identify and contact all copyright holders whose work is used in this paper. To avoid the issue of disclosure of answer-related information to candidates, all copyright acknowledgements are reproduced in the OCR Copyright Acknowledgements Booklet. This is produced for each series of examinations and is freely available to download from our public website (www.ocr.org.uk) after the live examination series. If OCR has unwittingly failed to correctly acknowledge or clear any third-party content in this assessment material, OCR will be happy to correct its mistake at the earliest possible opportunity. For queries or further information please contact the Copyright Team, First Floor, 9 Hills Road, Cambridge CB2 1GE.

OCR is part of the Cambridge Assessment Group; Cambridge Assessment is the brand name of University of Cambridge Local Examinations Syndicate (UCLES), which is itself a department of the University of Cambridge.

1



The diagram shows triangle ABC , with $AB = 9$ cm, $AC = 17$ cm and angle $BAC = 40^\circ$.

(i) Find the length of BC . [2]

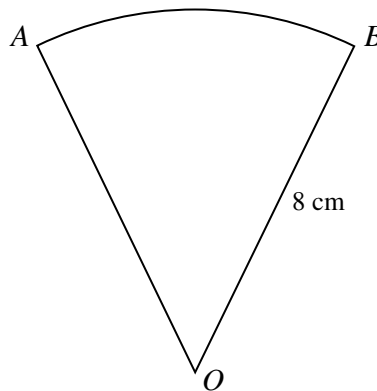
(ii) Find the area of triangle ABC . [2]

(iii) D is the point on AC such that angle $BDA = 63^\circ$. Find the length of BD . [3]

2 (i) Find $\int (6x^{\frac{1}{2}} - 1) dx$. [3]

(ii) Hence find the equation of the curve for which $\frac{dy}{dx} = 6x^{\frac{1}{2}} - 1$ and which passes through the point $(4, 17)$. [3]

3

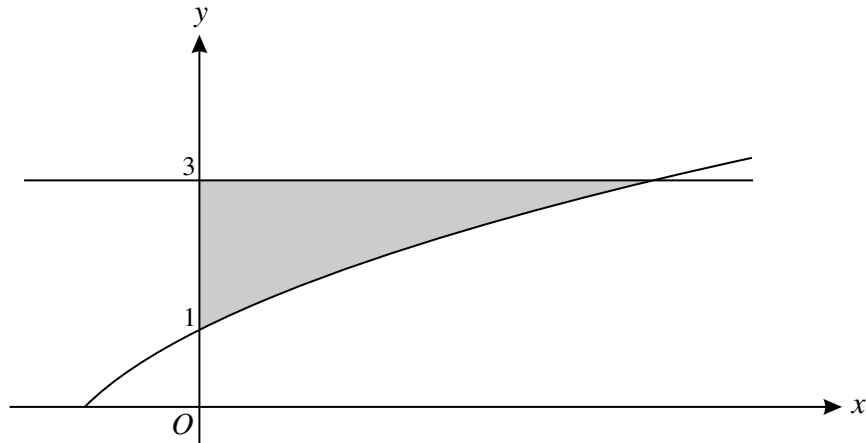


The diagram shows a sector AOB of a circle, centre O and radius 8 cm. The perimeter of the sector is 23.2 cm.

(i) Find angle AOB in radians. [3]

(ii) Find the area of the sector. [2]

4



The diagram shows the curve $y = -1 + \sqrt{x+4}$ and the line $y = 3$.

(i) Show that $y = -1 + \sqrt{x+4}$ can be rearranged as $x = y^2 + 2y - 3$. [2]

(ii) Hence find by integration the exact area of the shaded region enclosed between the curve, the y-axis and the line $y = 3$. [5]

5 The first four terms in the binomial expansion of $(3 + kx)^5$, in ascending powers of x , can be written as $a + bx + cx^2 + dx^3$.

(i) State the value of a . [1]

(ii) Given that $b = c$, find the value of k . [5]

(iii) Hence find the value of d . [2]

6 The cubic polynomial $f(x)$ is defined by $f(x) = x^3 + x^2 - 11x + 10$.

(i) Use the factor theorem to find a factor of $f(x)$. [2]

(ii) Hence solve the equation $f(x) = 0$, giving each root in an exact form. [6]

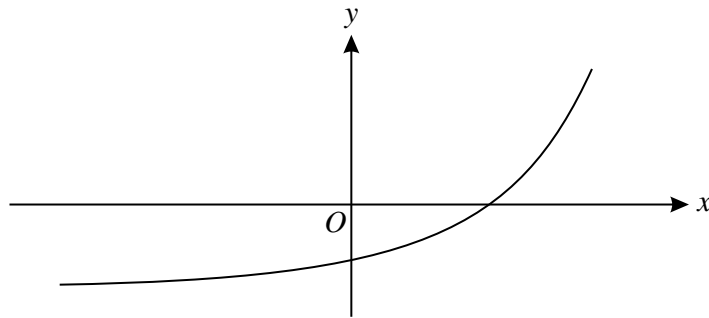
7 (a) The first term of a geometric progression is 7 and the common ratio is -2 .

(i) Find the ninth term. [2]

(ii) Find the sum of the first 15 terms. [2]

(b) The first term of an arithmetic progression is 7 and the common difference is -2 . The sum of the first N terms is -2900 . Find the value of N . [5]

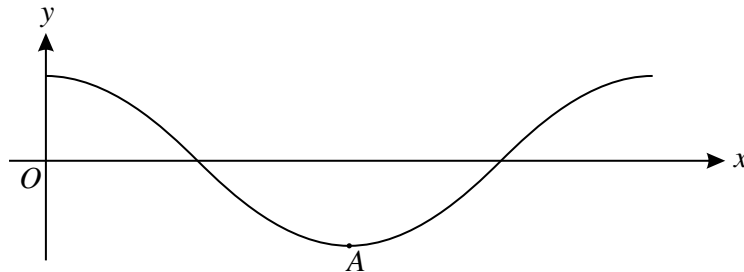
[Questions 8 and 9 are printed overleaf.]



The diagram shows the curve $y = 2^x - 3$.

- (i) Describe the geometrical transformation that transforms the curve $y = 2^x$ to the curve $y = 2^x - 3$. [2]
- (ii) State the y -coordinate of the point where the curve $y = 2^x - 3$ crosses the y -axis. [1]
- (iii) Find the x -coordinate of the point where the curve $y = 2^x - 3$ crosses the x -axis, giving your answer in the form $\log_a b$. [2]
- (iv) The curve $y = 2^x - 3$ passes through the point $(p, 62)$. Use logarithms to find the value of p , correct to 3 significant figures. [3]
- (v) Use the trapezium rule, with 2 strips each of width 0.5, to find an estimate for $\int_3^4 (2^x - 3) dx$. Give your answer correct to 3 significant figures. [3]

9 (a)



The diagram shows part of the curve $y = \cos 2x$, where x is in radians. The point A is the minimum point of this part of the curve.

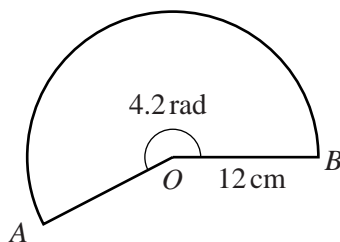
- (i) State the period of $y = \cos 2x$. [1]
- (ii) State the coordinates of A . [2]
- (iii) Solve the inequality $\cos 2x \leq 0.5$ for $0 \leq x \leq \pi$, giving your answers exactly. [4]
- (b) Solve the equation $\cos 2x = \sqrt{3} \sin 2x$ for $0 \leq x \leq \pi$, giving your answers exactly. [4]

Copyright Information

OCR is committed to seeking permission to reproduce all third-party content that it uses in its assessment materials. OCR has attempted to identify and contact all copyright holders whose work is used in this paper. To avoid the issue of disclosure of answer-related information to candidates, all copyright acknowledgements are reproduced in the OCR Copyright Acknowledgements Booklet. This is produced for each series of examinations and is freely available to download from our public website (www.ocr.org.uk) after the live examination series. If OCR has unwittingly failed to correctly acknowledge or clear any third-party content in this assessment material, OCR will be happy to correct its mistake at the earliest possible opportunity. For queries or further information please contact the Copyright Team, First Floor, 9 Hills Road, Cambridge CB2 1GE.

OCR is part of the Cambridge Assessment Group; Cambridge Assessment is the brand name of University of Cambridge Local Examinations Syndicate (UCLES), which is itself a department of the University of Cambridge.

1

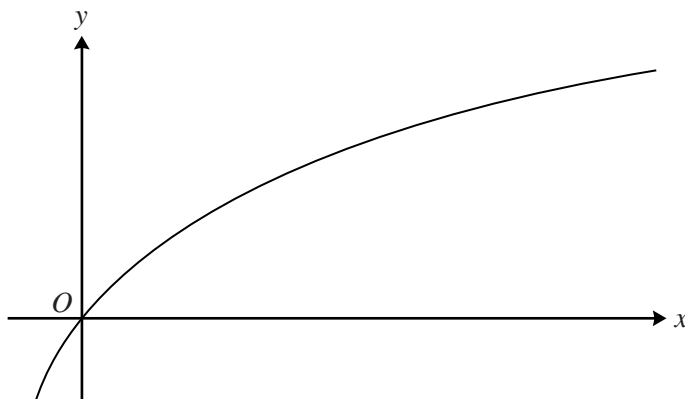


The diagram shows a sector AOB of a circle with centre O and radius 12 cm. The reflex angle AOB is 4.2 radians.

(i) Find the perimeter of the sector. [3]

(ii) Find the area of the sector. [2]

2



The diagram shows the curve $y = \log_{10}(2x + 1)$.

(i) Use the trapezium rule with 4 strips each of width 1.5 to find an approximation to the area of the region bounded by the curve, the x -axis and the lines $x = 4$ and $x = 10$. Give your answer correct to 3 significant figures. [4]

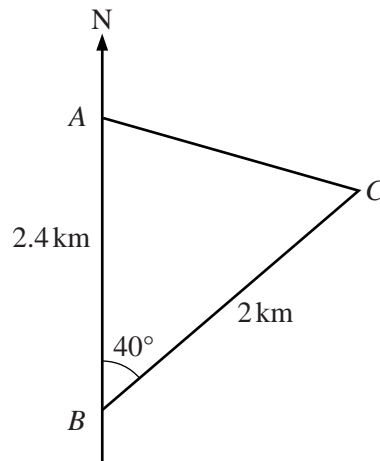
(ii) Explain why this approximation is an under-estimate. [1]

3 One of the terms in the binomial expansion of $(4 + ax)^6$ is $160x^3$.

(i) Find the value of a . [4]

(ii) Using this value of a , find the first two terms in the expansion of $(4 + ax)^6$ in ascending powers of x . [2]

4



The diagram shows two points A and B on a straight coastline, with A being 2.4 km due north of B . A stationary ship is at point C , on a bearing of 040° and at a distance of 2 km from B .

(i) Find the distance AC , giving your answer correct to 3 significant figures. [2]

(ii) Find the bearing of C from A . [3]

(iii) Find the shortest distance from the ship to the coastline. [2]

5 The cubic polynomial $f(x)$ is defined by $f(x) = 2x^3 + 3x^2 - 17x + 6$.

(i) Find the remainder when $f(x)$ is divided by $(x - 3)$. [2]

(ii) Given that $f(2) = 0$, express $f(x)$ as the product of a linear factor and a quadratic factor. [4]

(iii) Determine the number of real roots of the equation $f(x) = 0$, giving a reason for your answer. [2]

6 A sequence u_1, u_2, u_3, \dots is defined by $u_n = 85 - 5n$ for $n \geq 1$.

(i) Write down the values of u_1, u_2 and u_3 . [2]

(ii) Find $\sum_{n=1}^{20} u_n$. [3]

(iii) Given that u_1, u_5 and u_p are, respectively, the first, second and third terms of a geometric progression, find the value of p . [4]

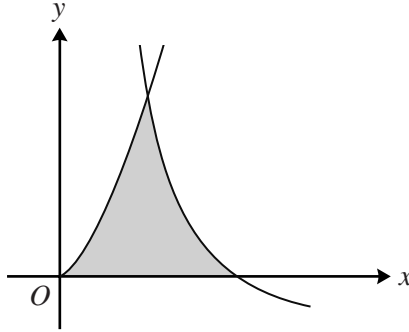
(iv) Find the sum to infinity of the geometric progression in part (iii). [2]

Jan 2012

7 (a) Find $\int (x^2 + 4)(x - 6) dx$.

[3]

(b)



The diagram shows the curve $y = 6x^{\frac{3}{2}}$ and part of the curve $y = \frac{8}{x^2} - 2$, which intersect at the point (1, 6). Use integration to find the area of the shaded region enclosed by the two curves and the x -axis. [8]

8 (a) Use logarithms to solve the equation $7^{w-3} - 4 = 180$, giving your answer correct to 3 significant figures. [4]

(b) Solve the simultaneous equations

$$\log_{10}x + \log_{10}y = \log_{10}3, \quad \log_{10}(3x + y) = 1. \quad [6]$$

9 (i) Sketch the graph of $y = \tan(\frac{1}{2}x)$ for $-2\pi \leq x \leq 2\pi$ on the axes provided.

On the same axes, sketch the graph of $y = 3\cos(\frac{1}{2}x)$ for $-2\pi \leq x \leq 2\pi$, indicating the point of intersection with the y -axis. [3]

(ii) Show that the equation $\tan(\frac{1}{2}x) = 3\cos(\frac{1}{2}x)$ can be expressed in the form

$$3\sin^2(\frac{1}{2}x) + \sin(\frac{1}{2}x) - 3 = 0.$$

Hence solve the equation $\tan(\frac{1}{2}x) = 3\cos(\frac{1}{2}x)$ for $-2\pi \leq x \leq 2\pi$. [6]

Copyright Information

OCR is committed to seeking permission to reproduce all third-party content that it uses in its assessment materials. OCR has attempted to identify and contact all copyright holders whose work is used in this paper. To avoid the issue of disclosure of answer-related information to candidates, all copyright acknowledgements are reproduced in the OCR Copyright Acknowledgements Booklet. This is produced for each series of examinations and is freely available to download from our public website (www.ocr.org.uk) after the live examination series.

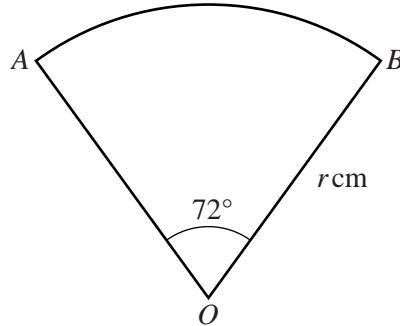
If OCR has unwittingly failed to correctly acknowledge or clear any third-party content in this assessment material, OCR will be happy to correct its mistake at the earliest possible opportunity.

For queries or further information please contact the Copyright Team, First Floor, 9 Hills Road, Cambridge CB2 1GE.

OCR is part of the Cambridge Assessment Group; Cambridge Assessment is the brand name of University of Cambridge Local Examinations Syndicate (UCLES), which is itself a department of the University of Cambridge.

- 1 (i) Find the binomial expansion of $(3 + 2x)^5$, simplifying the terms. [4]
 (ii) Hence find the binomial expansion of $(3 + 2x)^5 + (3 - 2x)^5$. [2]
- 2 (i) Find $\int(x^2 - 2x + 5) dx$. [3]
 (ii) Hence find the equation of the curve for which $\frac{dy}{dx} = x^2 - 2x + 5$ and which passes through the point $(3, 11)$. [3]

3



The diagram shows a sector AOB of a circle, centre O and radius r cm. Angle AOB is 72° .

- (i) Express 72° exactly in radians, simplifying your answer. [1]

The area of the sector AOB is 45π cm².

- (ii) Find the value of r . [2]
 (iii) Find the area of the segment bounded by the arc AB and the chord AB , giving your answer correct to 3 significant figures. [3]

4 Solve the equation

$$4 \cos^2 x + 7 \sin x - 7 = 0,$$

giving all values of x between 0° and 360° . [6]

5 (a) A sequence u_1, u_2, u_3, \dots is defined by

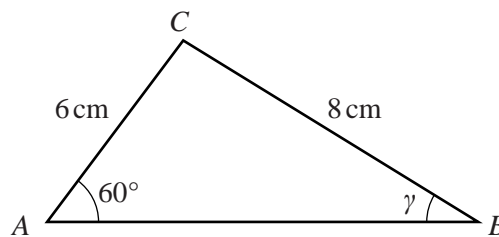
$$u_1 = 4 \quad \text{and} \quad u_{n+1} = \frac{2}{u_n} \quad \text{for } n \geq 1.$$

- (i) Write down the values of u_2 and u_3 . [2]
 (ii) Describe the behaviour of the sequence. [1]
- (b) In an arithmetic progression the ninth term is 18 and the sum of the first nine terms is 72. Find the first term and the common difference. [5]

- 6 (i) Use the trapezium rule, with 2 strips each of width 4, to show that an approximate value of $\int_1^9 4\sqrt{x} \, dx$ is $32 + 16\sqrt{5}$. [3]
- (ii) Use a sketch graph to explain why the actual value of $\int_1^9 4\sqrt{x} \, dx$ is greater than $32 + 16\sqrt{5}$. [2]
- (iii) Use integration to find the exact value of $\int_1^9 4\sqrt{x} \, dx$. [4]

- 7 (a) (i) Given that α is the acute angle such that $\tan \alpha = \frac{2}{5}$, find the exact value of $\cos \alpha$. [2]
- (ii) Given that β is the obtuse angle such that $\sin \beta = \frac{3}{7}$, find the exact value of $\cos \beta$. [3]

(b)



The diagram shows a triangle ABC with $AC = 6$ cm, $BC = 8$ cm, angle $BAC = 60^\circ$ and angle $ABC = \gamma$. Find the exact value of $\sin \gamma$, simplifying your answer. [3]

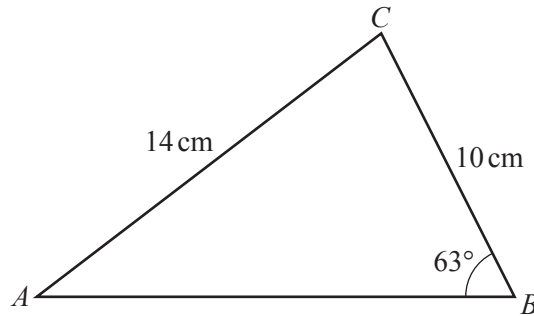
- 8 Two cubic polynomials are defined by

$$f(x) = x^3 + (a - 3)x + 2b, \quad g(x) = 3x^3 + x^2 + 5ax + 4b,$$

where a and b are constants.

- (i) Given that $f(x)$ and $g(x)$ have a common factor of $(x - 2)$, show that $a = -4$ and find the value of b . [6]
- (ii) Using these values of a and b , factorise $f(x)$ fully. Hence show that $f(x)$ and $g(x)$ have two common factors. [5]
- 9 (a) An arithmetic progression has first term $\log_2 27$ and common difference $\log_2 x$.
- (i) Show that the fourth term can be written as $\log_2 (27x^3)$. [3]
- (ii) Given that the fourth term is 6, find the exact value of x . [2]
- (b) A geometric progression has first term $\log_2 27$ and common ratio $\log_2 y$.
- (i) Find the set of values of y for which the geometric progression has a sum to infinity. [2]
- (ii) Find the exact value of y for which the sum to infinity of the geometric progression is 3. [5]

1



The diagram shows triangle ABC , with $AC = 14$ cm, $BC = 10$ cm and angle $ABC = 63^\circ$.

(i) Find angle CAB . [2]

(ii) Find the length of AB . [2]

2 A sequence u_1, u_2, u_3, \dots is defined by

$$u_1 = 7 \quad \text{and} \quad u_{n+1} = u_n + 4 \quad \text{for } n \geq 1.$$

(i) Show that $u_{17} = 71$. [2]

(ii) Show that $\sum_{n=1}^{35} u_n = \sum_{n=36}^{50} u_n$. [4]

3 A curve has an equation which satisfies $\frac{dy}{dx} = kx(2x - 1)$ for all values of x . The point $P(2, 7)$ lies on the curve and the gradient of the curve at P is 9.

(i) Find the value of the constant k . [2]

(ii) Find the equation of the curve. [5]

4 (i) Find the binomial expansion of $(2 + x)^5$, simplifying the terms. [4]

(ii) Hence find the coefficient of y^3 in the expansion of $(2 + 3y + y^2)^5$. [3]

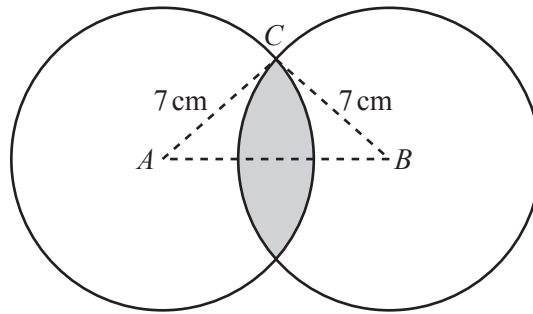
5 (i) Show that the equation $2 \sin x = \frac{4 \cos x - 1}{\tan x}$ can be expressed in the form

$$6 \cos^2 x - \cos x - 2 = 0. \quad [3]$$

(ii) Hence solve the equation $2 \sin x = \frac{4 \cos x - 1}{\tan x}$, giving all values of x between 0° and 360° . [4]

- 6 (i) The first three terms of an arithmetic progression are $2x$, $x + 4$ and $2x - 7$ respectively. Find the value of x . [3]
- (ii) The first three terms of another sequence are also $2x$, $x + 4$ and $2x - 7$ respectively.
- (a) Verify that when $x = 8$ the terms form a geometric progression and find the sum to infinity in this case. [4]
- (b) Find the other possible value of x that also gives a geometric progression. [4]

7

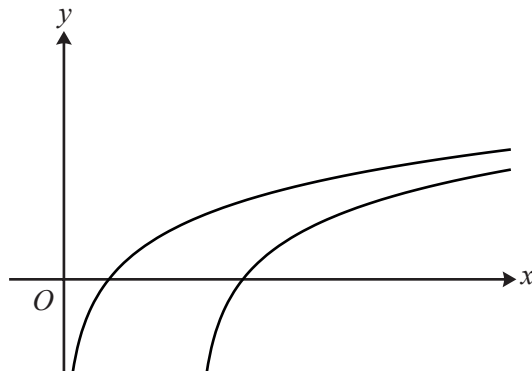


The diagram shows two circles of radius 7 cm with centres A and B . The distance AB is 12 cm and the point C lies on both circles. The region common to both circles is shaded.

- (i) Show that angle CAB is 0.5411 radians, correct to 4 significant figures. [2]
- (ii) Find the perimeter of the shaded region. [2]
- (iii) Find the area of the shaded region. [5]

[Questions 8 and 9 are printed overleaf.]

8



The diagram shows the curves $y = \log_2 x$ and $y = \log_2(x - 3)$.

(i) Describe the geometrical transformation that transforms the curve $y = \log_2 x$ to the curve $y = \log_2(x - 3)$. [2]

(ii) The curve $y = \log_2 x$ passes through the point $(a, 3)$. State the value of a . [1]

(iii) The curve $y = \log_2(x - 3)$ passes through the point $(b, 1.8)$. Find the value of b , giving your answer correct to 3 significant figures. [2]

(iv) The point P lies on $y = \log_2 x$ and has an x -coordinate of c . The point Q lies on $y = \log_2(x - 3)$ and also has an x -coordinate of c . Given that the distance PQ is 4 units find the exact value of c . [4]

9 The positive constant a is such that $\int_a^{2a} \frac{2x^3 - 5x^2 + 4}{x^2} dx = 0$.

(i) Show that $3a^3 - 5a^2 + 2 = 0$. [6]

(ii) Show that $a = 1$ is a root of $3a^3 - 5a^2 + 2 = 0$, and hence find the other possible value of a , giving your answer in simplified surd form. [6]

Copyright Information

OCR is committed to seeking permission to reproduce all third-party content that it uses in its assessment materials. OCR has attempted to identify and contact all copyright holders whose work is used in this paper. To avoid the issue of disclosure of answer-related information to candidates, all copyright acknowledgements are reproduced in the OCR Copyright Acknowledgements Booklet. This is produced for each series of examinations and is freely available to download from our public website (www.ocr.org.uk) after the live examination series.

If OCR has unwittingly failed to correctly acknowledge or clear any third-party content in this assessment material, OCR will be happy to correct its mistake at the earliest possible opportunity.

For queries or further information please contact the Copyright Team, First Floor, 9 Hills Road, Cambridge CB2 1GE.

OCR is part of the Cambridge Assessment Group; Cambridge Assessment is the brand name of University of Cambridge Local Examinations Syndicate (UCLES), which is itself a department of the University of Cambridge.

- 1 Use the trapezium rule, with 3 strips each of width 2, to estimate the value of

$$\int_5^{11} \frac{8}{x} dx. \quad [4]$$

- 2 Solve each of the following equations, for $0^\circ \leq x \leq 360^\circ$.

(i) $\sin \frac{1}{2}x = 0.8$ [3]

(ii) $\sin x = 3 \cos x$ [3]

- 3 (i) Find and simplify the first three terms in the expansion of $(2 + 5x)^6$ in ascending powers of x . [4]

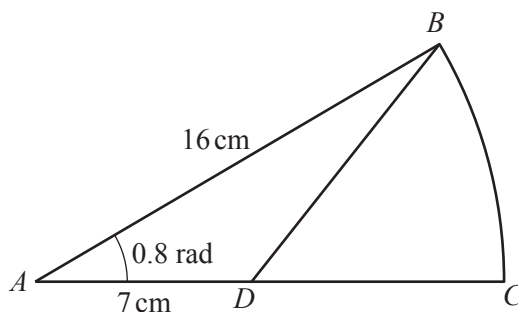
(ii) In the expansion of $(3 + cx)^2(2 + 5x)^6$, the coefficient of x is 4416. Find the value of c . [3]

4 (a) Find $\int (5x^3 - 6x + 1) dx$. [3]

(b) (i) Find $\int 24x^{-3} dx$. [2]

(ii) Given that $\int_a^\infty 24x^{-3} dx = 3$, find the value of the positive constant a . [3]

5



The diagram shows a sector BAC of a circle with centre A and radius 16 cm. The angle BAC is 0.8 radians. The length AD is 7 cm.

(i) Find the area of the region BDC . [4]

(ii) Find the perimeter of the region BDC . [4]

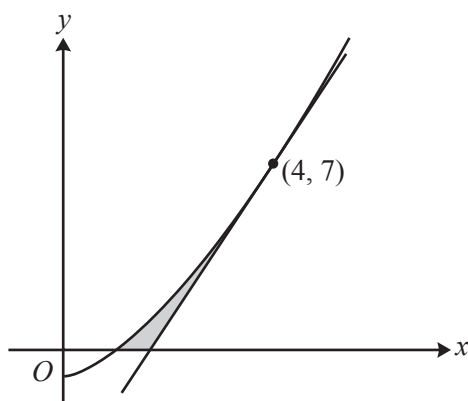
- 6 Sarah is carrying out a series of experiments which involve using increasing amounts of a chemical. In the first experiment she uses 6 g of the chemical and in the second experiment she uses 7.8 g of the chemical.
- (i) Given that the amounts of the chemical used form an arithmetic progression, find the total amount of chemical used in the first 30 experiments. [3]
- (ii) Instead it is given that the amounts of the chemical used form a geometric progression. Sarah has a total of 1800 g of the chemical available. Show that N , the greatest number of experiments possible, satisfies the inequality

$$1.3^N \leq 91,$$

and use logarithms to calculate the value of N .

[6]

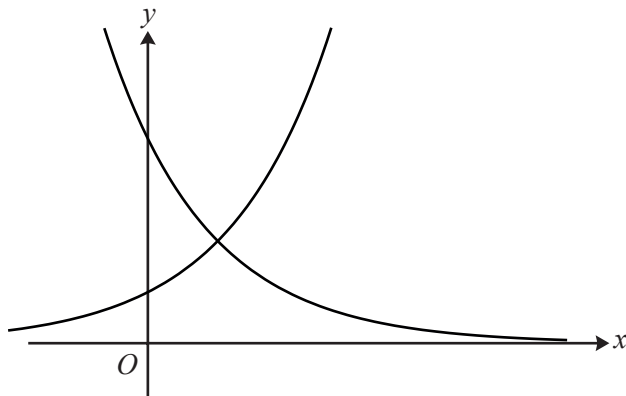
7



The diagram shows the curve $y = x^{\frac{3}{2}} - 1$, which crosses the x -axis at $(1, 0)$, and the tangent to the curve at the point $(4, 7)$.

- (i) Show that $\int_1^4 (x^{\frac{3}{2}} - 1) dx = 9\frac{2}{5}$. [4]
- (ii) Hence find the exact area of the shaded region enclosed by the curve, the tangent and the x -axis. [5]

8



The diagram shows the curves $y = a^x$ and $y = 4b^x$.

- (i) (a) State the coordinates of the point of intersection of $y = a^x$ with the y -axis. [1]
- (b) State the coordinates of the point of intersection of $y = 4b^x$ with the y -axis. [1]
- (c) State a possible value for a and a possible value for b . [2]
- (ii) It is now given that $ab = 2$. Show that the x -coordinate of the point of intersection of $y = a^x$ and $y = 4b^x$ can be written as

$$x = \frac{2}{2\log_2 a - 1}. \quad [5]$$

9 The cubic polynomial $f(x)$ is defined by $f(x) = 4x^3 - 7x - 3$.

- (i) Find the remainder when $f(x)$ is divided by $(x - 2)$. [2]
- (ii) Show that $(2x + 1)$ is a factor of $f(x)$ and hence factorise $f(x)$ completely. [6]
- (iii) Solve the equation

$$4\cos^3\theta - 7\cos\theta - 3 = 0$$

for $0 \leq \theta \leq 2\pi$. Give each solution for θ in an exact form. [4]

Copyright Information

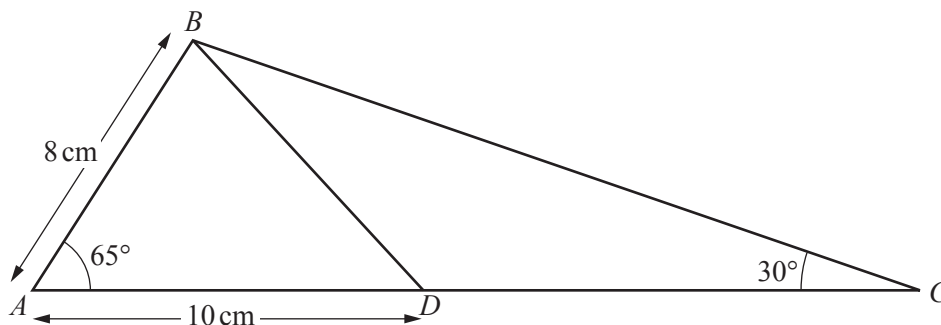
OCR is committed to seeking permission to reproduce all third-party content that it uses in its assessment materials. OCR has attempted to identify and contact all copyright holders whose work is used in this paper. To avoid the issue of disclosure of answer-related information to candidates, all copyright acknowledgements are reproduced in the OCR Copyright Acknowledgements Booklet. This is produced for each series of examinations and is freely available to download from our public website (www.ocr.org.uk) after the live examination series.

If OCR has unwittingly failed to correctly acknowledge or clear any third-party content in this assessment material, OCR will be happy to correct its mistake at the earliest possible opportunity.

For queries or further information please contact the Copyright Team, First Floor, 9 Hills Road, Cambridge CB2 1GE.

OCR is part of the Cambridge Assessment Group; Cambridge Assessment is the brand name of University of Cambridge Local Examinations Syndicate (UCLES), which is itself a department of the University of Cambridge.

1



The diagram shows triangle ABC , with $AB = 8\text{ cm}$, angle $BAC = 65^\circ$ and angle $BCA = 30^\circ$. The point D is on AC such that $AD = 10\text{ cm}$.

(i) Find the area of triangle ABD . [2]

(ii) Find the length of BD . [2]

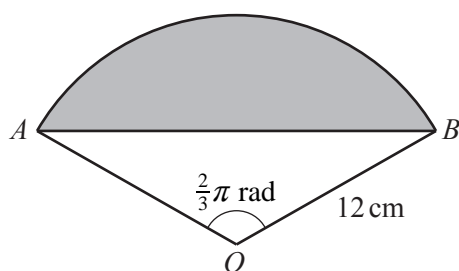
(iii) Find the length of BC . [2]

2 A sequence u_1, u_2, u_3, \dots is defined by $u_n = 3n - 1$, for $n \geq 1$.

(i) Find the values of u_1, u_2 and u_3 . [2]

(ii) Find $\sum_{n=1}^{40} u_n$. [3]

3



The diagram shows a sector OAB of a circle, centre O and radius 12 cm . The angle AOB is $\frac{2}{3}\pi$ radians.

(i) Find the exact length of the arc AB . [2]

(ii) Find the exact area of the shaded segment enclosed by the arc AB and the chord AB . [5]

- 4 (i) Show that the equation

$$\sin x - \cos x = \frac{6 \cos x}{\tan x}$$

can be expressed in the form

$$\tan^2 x - \tan x - 6 = 0. \quad [2]$$

- (ii) Hence solve the equation $\sin x - \cos x = \frac{6 \cos x}{\tan x}$ for $0^\circ \leq x \leq 360^\circ$. [4]

- 5 Solve the equation $2^{4x-1} = 3^{5-2x}$, giving your answer in the form $x = \frac{\log_{10} a}{\log_{10} b}$. [6]

- 6 (i) Find the binomial expansion of $\left(x^3 + \frac{2}{x^2}\right)^4$, simplifying the terms. [5]

- (ii) Hence find $\int \left(x^3 + \frac{2}{x^2}\right)^4 dx$. [4]

- 7 The cubic polynomial $f(x)$ is defined by $f(x) = 12 - 22x + 9x^2 - x^3$.

- (i) Find the remainder when $f(x)$ is divided by $(x + 2)$. [2]

- (ii) Show that $(3 - x)$ is a factor of $f(x)$. [1]

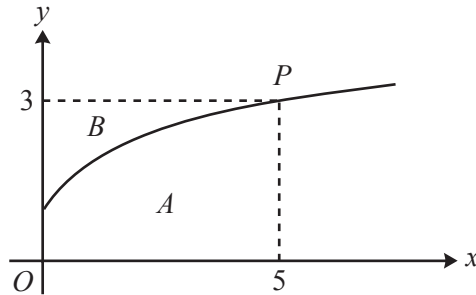
- (iii) Express $f(x)$ as the product of a linear factor and a quadratic factor. [3]

- (iv) Hence solve the equation $f(x) = 0$, giving each root in simplified surd form where appropriate. [3]

- 8 (a) The first term of a geometric progression is 50 and the common ratio is 0.8. Use logarithms to find the smallest value of k such that the value of the k th term is less than 0.15. [4]

- (b) In a different geometric progression, the second term is -3 and the sum to infinity is 4. Show that there is only one possible value of the common ratio and hence find the first term. [8]

Question 9 begins on page 4.



The diagram shows part of the curve $y = -3 + 2\sqrt{x+4}$. The point $P(5, 3)$ lies on the curve. Region A is bounded by the curve, the x -axis, the y -axis and the line $x = 5$. Region B is bounded by the curve, the y -axis and the line $y = 3$.

- (i) Use the trapezium rule, with 2 strips each of width 2.5, to find an approximate value for the area of region A , giving your answer correct to 3 significant figures. [3]
- (ii) Use your answer to part (i) to deduce an approximate value for the area of region B . [2]
- (iii) By first writing the equation of the curve in the form $x = f(y)$, use integration to show that the exact area of region B is $\frac{14}{3}$. [7]

END OF QUESTION PAPER



Copyright Information

OCR is committed to seeking permission to reproduce all third-party content that it uses in its assessment materials. OCR has attempted to identify and contact all copyright holders whose work is used in this paper. To avoid the issue of disclosure of answer-related information to candidates, all copyright acknowledgements are reproduced in the OCR Copyright Acknowledgements Booklet. This is produced for each series of examinations and is freely available to download from our public website (www.ocr.org.uk) after the live examination series.

If OCR has unwittingly failed to correctly acknowledge or clear any third-party content in this assessment material, OCR will be happy to correct its mistake at the earliest possible opportunity.

For queries or further information please contact the Copyright Team, First Floor, 9 Hills Road, Cambridge CB2 1GE.

OCR is part of the Cambridge Assessment Group; Cambridge Assessment is the brand name of University of Cambridge Local Examinations Syndicate (UCLES), which is itself a department of the University of Cambridge.